

JB ACADEMY, AYODHYA
Review Test (2024-25)
Social Science-VII

Name of the Student-.....

Class & Section..... & Roll No.-

Time: 2 hrs

M.M: 50

(TRUST YOURSELF, YOU KNOW MORE THAN YOU THINK YOU DO)

(SECTION-A)

1. Match the following: (1)

Column A	Column B
(i) Rigveda	a. Focus on music chants
(ii) Samaveda	b. focused on medicines
(iii) Yajurveda	c. Contains prayers
(iv) Atharvaveda	d. Contains rituals

2. Match the following: (1)

Column A	Column B
(i) Sarpanch	a. Municipal corporation
(ii) Chairman	b. Government official
(iii) Patwari	c. Block level
(iv) Panchayat samiti	d. Gram Panchayat

3. Match the following: (1)

Column A	Column B
(i) Humidity	a. Precipitation
(ii) Temperature	b. Hygrometer
(iii) Rainfall	c. Barometer
(iv) Air pressure	d. Thermometer

4. Match the following: (1)

Column A	Column B
(i) Mango showers	a. Northern Plains
(ii) Bardoisila	b. West Bengal
(iii) Loo	c. Kerala
(iv) Kal Baisakhi	d. Assam

(SECTION-B)

5. Write down the full form of any Five-

(5)

- | | | | | |
|-----------|-----------|------------|---------------|------------|
| (i) RTI | (ii) CORD | (iii) NGOs | (iv) MLAs | (v) UNESCO |
| (vi) ULBs | (vii) MDM | (viii) CEO | (ix) PMGDISHA | |

[illegible]

(SECTION-C)

6. Define the following terms. (Any Five)

(5)

- | | | | |
|-----------------------|-------------------------|--------------------------|-------------------|
| (i) Pre- Modern sites | (ii) Hamlet | (iii) Primary activities | (iv) Manuscripts |
| (v) Patwari | (vi) Retreating Monsoon | (vii) Mural | (viii) xerophytes |

[illegible]

.....

.....

.....

.....

.....

.....

.....

.....

.....

(SECTION-D)

7. Fill in the blanks: (Attempt any Five)

(5)

- (i) Mudra rakshasa written by
- (ii) Kautilya, also known as , wrote the famous book
- (iii) The name kalibangan was derived from
- (iv) temple recognises as “living temple” in India.
- (v) Sarnath was sacked by , a General of the central Asia Rader Mohd. Of Gauri.
- (vi) Two areas that receives rainfall from the North-East Monsoon
-
- (vii) Sarnath emerged during the Urbanisation.
- (viii) The Madan Mohan Temple in Bishnupur is devoted to the worship of deity.
- (ix) The primary source of information in the 1960s was
- (x) The level of urbanisation in India was as per 2011 Census.

8. State whether the following statements are True or False. Rewrite the correct statements.(5)

- (i) The head of the Gram Panchayat is Mayor.
-

- (ii) The National Programme of Nutritional Support to primary Education, popularly known as Mid-Day Meal was launched in 2000.

.....
(iii) Devadasis were Temple dancers who lived in separate lanes in Temple towns & contributed to the development of classical dance forms.

.....
(iv) Delhi has an equable climate, but Mumbai experiences extreme climate.

.....
(v) India lies entirely in the tropical zone.

.....
9. Look at the picture of the instruments given here & identify them. What are they used for? (2)

1.



.....
.....

2.



.....
.....

10. Answer the following questions in brief: (Any Four)

(2x4=8)

(a) State any two changes that have impacted lifestyle in urban and rural areas.

(b) How is the climate of a place different from its weather?


(c) Areas situated towards the leeward side receive less rainfall than those on the windward side. Why?


(d) Why are Sarnath, Lumbini, Bodh Gaya and Kushinagar regarded as Buddhist holy places?

(e) What are the main categories of sources used to learn about the past?

(f) According to Legend, how did the Malla dynasty in Bishnupur come into existence?

.....







[illegible]

(3x4=12)

-
- This image shows a full page of white paper with horizontal dashed lines, typical of primary-ruled notebook paper. The lines are evenly spaced and run across the width of the page. There are no margins, text, or other markings on the paper.





India's Map for Q-11 (Part-E)



12. (A) On a Political Map of India, mark the following- (Any Four) (2x2=4)

- | | | |
|---------------|-----------------|--------------------|
| (i) Thanjavur | (ii) Kalibangan | (iii) Kaveripatnam |
| (iv) Uraiypur | (v) Sarnath | (vi) Lumbini |

(B) On a Physical Map of India, mark the following- (Any Four)

- (i) A city on the west coast that experience an equable climate,
- (ii) The wettest place in India,
- (iii) Retreating Monsoon,
- (iv) The area that lies in the leeward side of the Western Ghat,
- (v) A place that receives rain from North-East Monsoon.

