


# NEW ERA PUBLIC SCHOOL DWARKA



## HOLIDAY HOMEWORK CLASS III

*Hooray!*

*The holidays are here – a perfect time for fun, family, and discovery! But guess what? Learning doesn't stop – it just gets more exciting! This holiday homework is filled with interesting activities, puzzles, and mini-adventures that will make you think, create, and smile. So, grab your pencils, open your minds, and let the holiday learning journey begin! 🚀📖*





*Dear Children,*

*Wishing you all a joyful, refreshing, and fun-filled summer break! This is the perfect time to relax, recharge, and spend some beautiful moments with your family. Make the most of this wonderful season by bonding with your loved ones, exploring new hobbies, and learning through joyful experiences.*

*To help you stay connected with your learning in a light and engaging way, we have prepared a set of summer worksheets for you.*

- Please take printouts of your **worksheets ONLY** and complete them independently after revising the concepts we learned in the class. This will help you reinforce your understanding while keeping your mind active during the break.*
- There are questions based on the project from different subjects.*
- Use a separate A4 sheet for each subject if needed.*
- Write your Name, Class, Section and Roll Number on every sheet.*
- Handwriting should be neat and legible.*
- Parents may guide, but the work should be done by the student.*
- Arrange all sheets properly and submit them in a folder/file after the summer vacation.*
- Revise all the concepts and lessons of all subjects till date.*
- Practice reading and writing of both Hindi and English.*

# INTEGRATED PROJECT ON SIKKIM

Prepare a creative scrapbook on the state Sikkim using pictures, drawings, sentences, and decorative materials.

*Divide your scrapbook into the following sections:*

## **Section 1 – Cover page**

**Title: “Sikkim – The Land of Mountains”**

Draw or paste the following of Sikkim to make a collage-

- 1 Mountain
- 1 Monastery
- 1 Flower
- 1 Snow peak
- *Use your own creativity to create a beautiful cover page.*



## **Section 2 –Introduction to Sikkim**



Write about its:

- capital
- climate
- any special fact about the state

## **Section 3 - Plants of Sikkim**

1. Paste 2 most famous or special plants of Sikkim.

2. Write 3 uses of those plants.





#### Section 4 - Animals of Sikkim

1. Paste pictures of any 2 animals of Sikkim
2. Write 3 sentences about each of them.

#### Section 5 - Birds of Sikkim

1. Paste pictures of any 2 Birds of Sikkim
2. Give information about their beaks, claws and feet, nests and their eating habits.



#### Section 6 -A scenery using natural colours

- Draw a beautiful scenery of Sikkim and colour it using real and natural flowers only. Use flowers to colour. Rub them on your drawing to fill the colour. Under the drawing, write down the names of the flowers used for colouring and paste them.

#### Math Integration Questions

- Do it on A4 size sheets.

##### 1. Place-Value questions

The number of flowers found in different parts of Sikkim is 48,572.

- a) Write the place-value of 8.
- b) What is the value of digit 5 in the given number?
- c) Write the number in expanded form.

##### 2. Addition & Subtraction Questions

A wildlife park in Sikkim recorded 3,845 visitors in May and 2,976 visitors in June.

- a) How many visitors came in both the months altogether?
- b) If 1,258 visitors were children, how many were adults?

## SUBJECT - ENGLISH

Name: \_\_\_\_\_ Roll number- \_\_\_\_\_



1. ***“A book is a gift you can open again and again.”***

Reading makes children build their imagination and vocabulary and it takes them on a beautiful journey full of experience and knowledge.

Given below are some books that your child can read in summers and trust me it is going to be a wonderful experience.

- **“How the Sea Became Salty” by Sudha Murty.**
- **“The Girl with Golden Wings” by Sudha Murty.**

1. Write a poem in your own words about your grandparents and paste a picture of you with them.
2. ***“Storytelling is the most powerful way to put ideas in the world together.”***

Choose one of the topics given below and write a story using your imagination.

- ***It was my first birthday and my parents had planned something for me.....***
- ***One night I was reading a horror story in my room and suddenly I heard someone crying....***

Complete this activity in these three easy steps.



Step 1: The Colour Hunt (Nouns)

- **Task:** Look around your room. Find 5 things you can see.
- **Write:** Write their names below in your neatest handwriting.

1. \_\_\_\_\_ 2. \_\_\_\_\_ 3. \_\_\_\_\_

4. \_\_\_\_\_ 5. \_\_\_\_\_

- **Fun Part:** Make boxes around the words and fill them with their colours. For eg., if you have written apple, colour it red.



Step 2: My Favourite Character


- **Task:** Think of your favourite cartoon, movie, or storybook character.
- **Write:** Finish these two simple sentences:
  - *My favourite character is* \_\_\_\_\_.
  - *I like them because they are* \_\_\_\_\_.

**Fun Part:** Draw a quick, simple face of that character in the corner of your page.



Step 3: Daily Pencil Magic

- **Task:** Practice writing beautifully.
- **Write:** Copy this exact sentence two times on the lines below:
  - *The quick brown fox jumps over the lazy dog.*

•  \_\_\_\_\_

•  \_\_\_\_\_

## UNSEEN PASSAGE

Read the passage given below and answer the following questions.



Sikkim is a small and beautiful state in India. It is famous for its snowy mountains, green forests, and colourful flowers. The capital of Sikkim is Gangtok. Many people visit Sikkim to enjoy nature and see the high mountains.

1. Sikkim is a \_\_\_\_\_ state in India.

- a) large
- b) small
- c) hot

2. The capital of Sikkim is \_\_\_\_\_.

- a) Delhi
- b) Mumbai
- c) Gangtok

3. People visit Sikkim to enjoy \_\_\_\_\_.

- a) deserts
- b) nature
- c) factories

4. Sikkim is famous for its \_\_\_\_\_ mountains.

- a) sandy
- b) snowy
- c) rock

5. Sikkim has many \_\_\_\_\_ forests.

- a) blue
- b) brown
- c) green

## STORY WRITING

Use the words to complete the story.

because first last before tell both gave  
green off very sleep read wash pull fast

Every night, one-hour \_\_\_\_\_ I go to bed, I get ready to sleep by doing the same four

things. \_\_\_\_\_ I run down the stairs as \_\_\_\_\_ as I can. Then I take

\_\_\_\_\_ my clothes and put on my night

suit. My favourite night suit is of the colour

\_\_\_\_\_ . I love this night suit that my

grandmother \_\_\_\_\_ to me. After I

wear my night suit I go to the washroom to

\_\_\_\_\_ my face and brush my teeth. Mom said it is \_\_\_\_\_ important to brush

\_\_\_\_\_ my top and bottom teeth to keep them healthy. When I am done in the

washroom, I get into my bed. I \_\_\_\_\_ the blanket over my head. Mom and dad come

into my room and say "Oh no! Where is Ananya?" I jump out and \_\_\_\_\_ them

"Here I am!"



## ADJECTIVES

Fill in the blanks with the most suitable adjectives.

racing	sleepy	thick	soft	delicious
orange	playful	funny	blue	beautiful

1. The \_\_\_\_\_ cat sat on the windowsill.

2. I found a \_\_\_\_\_ flower in the garden.

3. The \_\_\_\_\_ sun is setting in the evening.

4. My \_\_\_\_\_ teddy bear is so cute.

5. We saw a \_\_\_\_\_ bird in the tree.

6. The \_\_\_\_\_ puppy ran after the child.

7. I love to eat \_\_\_\_\_ ice-cream.

8. The \_\_\_\_\_ car is very fast.

9. The \_\_\_\_\_ book is on the shelf.

10. I drew a \_\_\_\_\_ picture at school.



## विषय – हिंदी

नाम - \_\_\_\_\_ अनुक्रमांक - \_\_\_\_\_

प्रिय विद्यार्थियों,  
गर्मियों की छुट्टियाँ मनोरंजन और कुछ नया सीखने का एक शानदार अवसर होती हैं। इस बार छुट्टियों के मजे के साथ-साथ हम अपनी प्यारी भाषा हिंदी को और बेहतर बनाएँगे।

नीचे दी गई कार्यपत्रिका का प्रिन्ट निकाल कर अभ्यास करें -

**प्रश्न 1. नीचे दिए गए व्यंजनों और स्वरों को जोड़कर शब्द बनाओ।**

1. द् + अ + क् + ष् + अ = \_\_\_\_\_

2. त + इ + त + ल + ई = \_\_\_\_\_

3. ग + उ + ल + आ + ब = \_\_\_\_\_

4. क + ऋ + ष् + ण् + आ = \_\_\_\_\_

5. ह् + अ + अँ + स् + ई = \_\_\_\_\_

**प्रश्न 2. सही संयुक्त व्यंजन पर रंगीन गोला बनाओ।**

1. क् + ष् + अ = क्ष ष छ

2. त् + र् + अ = तर द त्र

3. ज् + ज् + अ = न ज्ञ ण

4. श् + र् + अ = श्र शर ष

**प्रश्न 3 : नीचे दिए गए शब्दों के वर्णों को अलग-अलग करके लिखिए।**

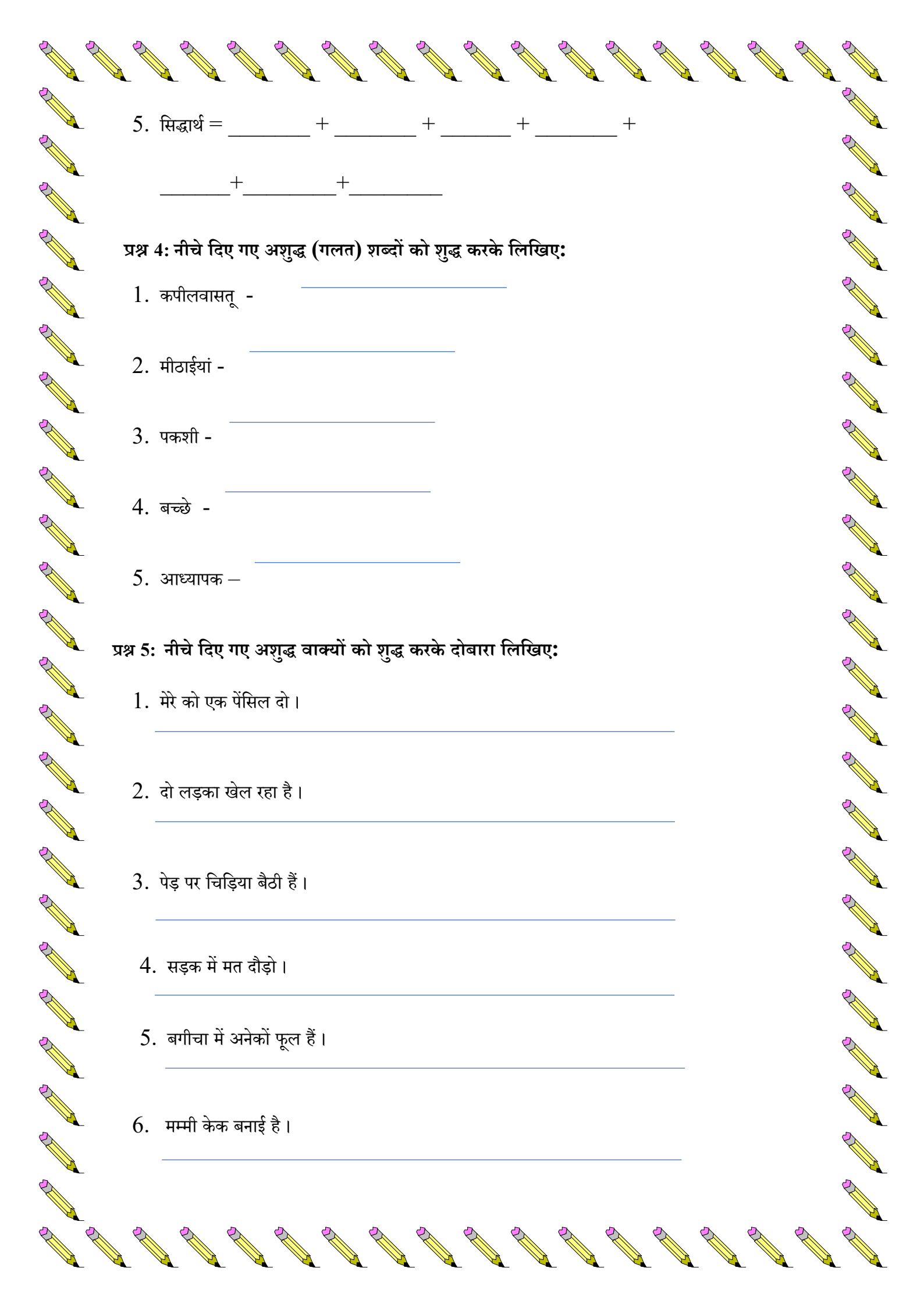
उदाहरण: आम = आ + म् + अ

1. हिंदी = \_\_\_\_\_ + \_\_\_\_\_ + \_\_\_\_\_ + \_\_\_\_\_ + \_\_\_\_\_

2. त्योहार = \_\_\_\_\_ + \_\_\_\_\_ + \_\_\_\_\_ + \_\_\_\_\_ + \_\_\_\_\_ + \_\_\_\_\_

3. कृपा = \_\_\_\_\_ + \_\_\_\_\_ + \_\_\_\_\_ + \_\_\_\_\_

4. बगीचा = \_\_\_\_\_ + \_\_\_\_\_ + \_\_\_\_\_ + \_\_\_\_\_ + \_\_\_\_\_ + \_\_\_\_\_



5. सिद्धार्थ = \_\_\_\_\_ + \_\_\_\_\_ + \_\_\_\_\_ + \_\_\_\_\_ +  
\_\_\_\_\_ + \_\_\_\_\_ + \_\_\_\_\_

प्रश्न 4: नीचे दिए गए अशुद्ध (गलत) शब्दों को शुद्ध करके लिखिए:

1. कपीलवासतू - \_\_\_\_\_
2. मीठाईयां - \_\_\_\_\_
3. पकशी - \_\_\_\_\_
4. बच्छे - \_\_\_\_\_
5. आध्यापक - \_\_\_\_\_

प्रश्न 5: नीचे दिए गए अशुद्ध वाक्यों को शुद्ध करके दोबारा लिखिए:

1. मेरे को एक पेंसिल दो ।  
\_\_\_\_\_
2. दो लड़का खेल रहा है ।  
\_\_\_\_\_
3. पेड़ पर चिड़िया बैठी हैं ।  
\_\_\_\_\_
4. सड़क में मत दौड़ो ।  
\_\_\_\_\_
5. बगीचा में अनेकों फूल हैं ।  
\_\_\_\_\_
6. मम्मी केक बनाई है ।  
\_\_\_\_\_

प्रश्न 6. कोष्ठक में दिए गए अंकों को हिंदी शब्दों में लिखिए।

1. मेरे पास (4) \_\_\_\_\_ नायाब खिलौने हैं।
2. एक सप्ताह में (7) \_\_\_\_\_ दिन होते हैं।
3. मेरी कक्षा में (19) \_\_\_\_\_ छात्र हैं।
4. आकाश में (1) \_\_\_\_\_ चाँद है।

प्रश्न 7: नीचे दिए गए गद्यांश को ध्यानपूर्वक पढ़िए और प्रश्नों के उत्तर दीजिए:

सिक्किम भारत का एक बहुत ही सुंदर और छोटा राज्य है। यह चारों तरफ से ऊँचे – ऊँचे पहाड़ों से घिरा हुआ है। यहाँ दुनिया की तीसरी सबसे ऊँची चोटी कंचनजंगा स्थित है। सिक्किम के लोग बहुत सीधे और मिलनसार होते हैं। यहाँ के लोग प्रकृति से बहुत प्यार करते हैं। इस राज्य में बहुत सारे सुंदर फूल, झरने और नदियाँ देखने को मिलती हैं। सिक्किम को भारत का पहला पूरी तरह से जैविक राज्य भी कहा जाता है, क्योंकि यहाँ खेती में रसायनों का उपयोग नहीं होता है। यहाँ की राजधानी गंगटोक है, जो एक बहुत ही खूबसूरत शहर है।

गद्यांश के आधार पर प्रश्नों के उत्तर को किसी एक रंग से रंगिए।

1. सिक्किम भारत का कैसा राज्य है?
  - क) बड़ा और सूखा
  - ख) छोटा और सुंदर
  - ग) केवल पहाड़ों वाला
2. दुनिया की तीसरी सबसे ऊँची चोटी कौन सी है?
  - क) एवरेस्ट
  - ख) के-2
  - ग) कंचनजंगा
3. सिक्किम की राजधानी का क्या नाम है?
  - क) दिल्ली
  - ख) गंगटोक
  - ग) मुंबई
4. सिक्किम को कैसा राज्य कहा जाता है?
  - क) जैविक राज्य
  - ख) औद्योगिक राज्य
  - ग) रेतीला राज्य

5. 'सुंदर' शब्द का विलोम शब्द गद्यांश के आधार पर सोचकर बताइए:

- क) अच्छा
- ख) बदसूरत
- ग) साफ़

प्रश्न 8. भारत की किन्हीं दो लोककथाओं को पढ़कर, नीचे पूछी गई जानकारी दीजिए।

क) पहली लोककथा का नाम —

ख) लेखक -

ग) उसमे से मेरी पसंदीदा कहानी का नाम —

घ) मेरा पसंदीदा पात्र —

ङ) दूसरी लोककथा का नाम —

च) लेखक -

छ) उसमे से मेरी पसंदीदा कहानी का नाम —

ज) मेरा पसंदीदा पात्र —

# SUBJECT – MATHEMATICS

## Worksheet 1

Name: \_\_\_\_\_ Roll number- \_\_\_\_\_ Date: \_\_\_\_\_

1. Circle the numbers that show the **correct comparison sign**.

a)  $3456 > 3465$

b)  $9087 < 9807$

c)  $4567 = 4567$

d)  $7005 > 6999$

e)  $8201 < 8102$

f)  $9999 = 9999$

g)  $5420 > 5240$

h)  $6789 < 6798$

2. **CHANGE ONE DIGIT** 

By how much does the number increase or decrease?

a) 5 in 3568 is changed to 8

\_\_\_\_\_

b) 2 in 2456 is changed to 7

\_\_\_\_\_

c) 9 in 9123 is changed to 4

\_\_\_\_\_

d) 3 in 6385 is changed to 1

\_\_\_\_\_

3. **PLACE-VALUE POWER** 

a) Write the place value and the face value of the digit in bold.

i) 4,**5**67 = \_\_\_\_\_

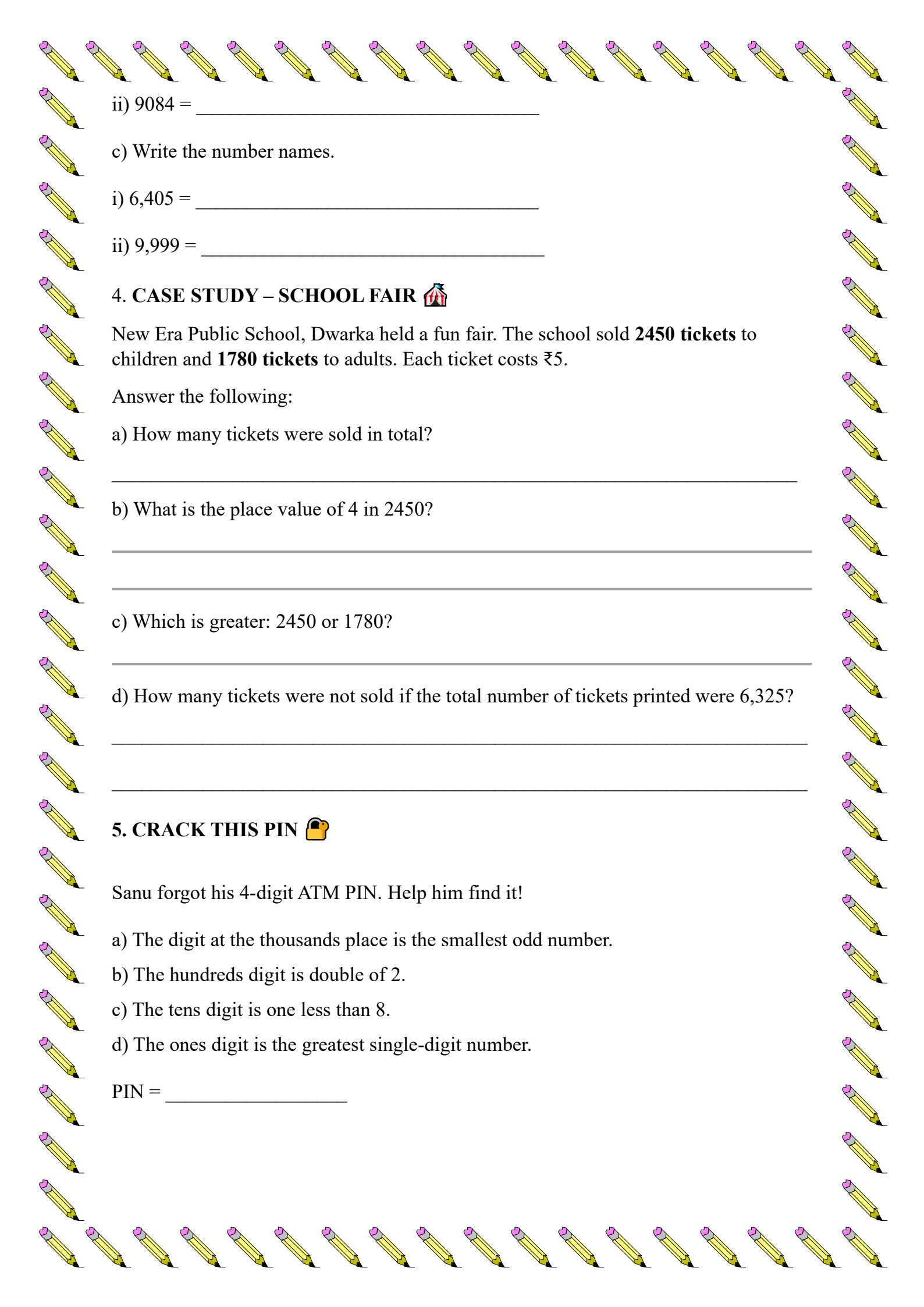
ii) **8**,231 = \_\_\_\_\_

iii) 7,**4**25 = \_\_\_\_\_

iv) 9,**8**1**6** = \_\_\_\_\_

b) Expand the numbers.

i) 4567 = \_\_\_\_\_



ii)  $9084 =$  \_\_\_\_\_

c) Write the number names.

i)  $6,405 =$  \_\_\_\_\_

ii)  $9,999 =$  \_\_\_\_\_

#### 4. CASE STUDY – SCHOOL FAIR

New Era Public School, Dwarka held a fun fair. The school sold **2450 tickets** to children and **1780 tickets** to adults. Each ticket costs ₹5.

Answer the following:

a) How many tickets were sold in total?

\_\_\_\_\_

b) What is the place value of 4 in 2450?

\_\_\_\_\_

\_\_\_\_\_

c) Which is greater: 2450 or 1780?

\_\_\_\_\_

d) How many tickets were not sold if the total number of tickets printed were 6,325?

\_\_\_\_\_

\_\_\_\_\_

#### 5. CRACK THIS PIN

Sanu forgot his 4-digit ATM PIN. Help him find it!

a) The digit at the thousands place is the smallest odd number.

b) The hundreds digit is double of 2.

c) The tens digit is one less than 8.

d) The ones digit is the greatest single-digit number.

PIN = \_\_\_\_\_

## 6. REVERSE THE DIGITS

Write the reversed number. Colour the bigger number.

Number	Reverse
4523	
7001	
3810	
6094	

## 7. ROMAN NUMERALS QUEST

a) Write in Roman numerals.

i) 9 = \_\_\_\_\_

ii) 14 = \_\_\_\_\_

iii) 25 = \_\_\_\_\_

iv) 39 = \_\_\_\_\_

v) 50 = \_\_\_\_\_

b) Write in Hindu-Arabic numerals.

i) XIX = \_\_\_\_\_

ii) XL = \_\_\_\_\_

iii) XXVII = \_\_\_\_\_

iv) XXXV = \_\_\_\_\_

v) XLIX = \_\_\_\_\_



## 8. ADDITION MAZE +

Solve the sums.

a)

$$\begin{array}{r} 3456 \\ + 1702 \\ \hline \end{array}$$

b)

$$\begin{array}{r} 5098 \\ + 2187 \\ \hline \end{array}$$

## 9. SUBTRACTION CHALLENGE -

a)

$$\begin{array}{r} 8000 \\ - 3567 \\ \hline \end{array}$$

b)

$$\begin{array}{r} 6425 \\ - 2189 \\ \hline \end{array}$$

## 10. BRAIN GYM

a) The successor of 9999 is \_\_\_\_\_

b) The predecessor of 1000 is \_\_\_\_\_

c) Greatest 4-digit number = \_\_\_\_\_

d) Smallest 4-digit number = \_\_\_\_\_

e) Make the greatest number using 3, 7, 1, 5 \_\_\_\_\_



Class 3 Mathematics

WORKSHEET 2

Name: \_\_\_\_\_ Roll number: \_\_\_\_\_ Date: \_\_\_\_\_

**1. 4-Digit Operations**

*Solve the following addition and subtraction problems. Show your work clearly.*

• **Addition:**

1.  $4567 + 2345$

2.  $7890 + 1234$

3.  $3005 + 6789$

4.  $1122 + 8899$

• **Subtraction:**

1.  $9876 - 5432$

2.  $7000 - 3456$

3.  $5123 - 1987$

4.  $8888 - 999$



## 2. Addition by Splitting Numbers

*Solve using the splitting numbers strategy:*

1.  $53 + 24$

2.  $61 + 18$

3.  $37 + 42$

4.  $83 + 12$

**3. Solve using the 'Making 9 to next tens and adding back' strategy to subtract.**

1.  $84 - 9$

2.  $62 - 19$

3.  $57 - 29$

4.  $71 - 9$

## 3. MENTAL MATHS

1. 20 more than 4675 = \_\_\_\_\_



2. The smallest 4-digit number using digits 7, 0, 4 and 9 is \_\_\_\_\_

3.  $6300 = 6000 + \underline{\hspace{2cm}} + 0$

4. The predecessor of 5000 is \_\_\_\_\_

5. The smallest 4-digit even number is \_\_\_\_\_

6. 100 less than 7205 = \_\_\_\_\_

7. Roman numeral for 24 is \_\_\_\_\_

8. 500 more than 3480 = \_\_\_\_\_

9. 1500, 2500, 3500, \_\_\_\_\_, \_\_\_\_\_

#### 4. MULTIPLE CHOICE QUESTIONS

Choose the correct answer.

1. There are \_\_\_\_\_ tens in 8450.

- (a) 84                                      (b) 845                                      (c) 8                                      (d) 45

2. The number in which the place value of 7 is 700 is:

- (a) 5724                                      (b) 8721                                      (c) 3075                                      (d) 9705

3.  $4000 + 200 + 8 =$

- (a) 4208                                      (b) 4280                                      (c) 4028                                      (d) 4802

4. The number 7065 can be written as:

- (a)  $7000 + 60 + 5$                       b)  $700 + 65$                       (c)  $7000 + 600 + 5$                       (d)  $70 + 65$

5. The number that comes just before 6000 is:

- (a) 5990                                      (b) 5999                                      (c) 6001                                      (d) 5900

6. Meena has number cards: 4, 6, 8.

Using these cards she can make a number between:

- (a) 100 and 200                      (b) 300 and 500                      (c) 600 and 900                      (d) 900 and 1000

#### 6. WORD PROBLEMS

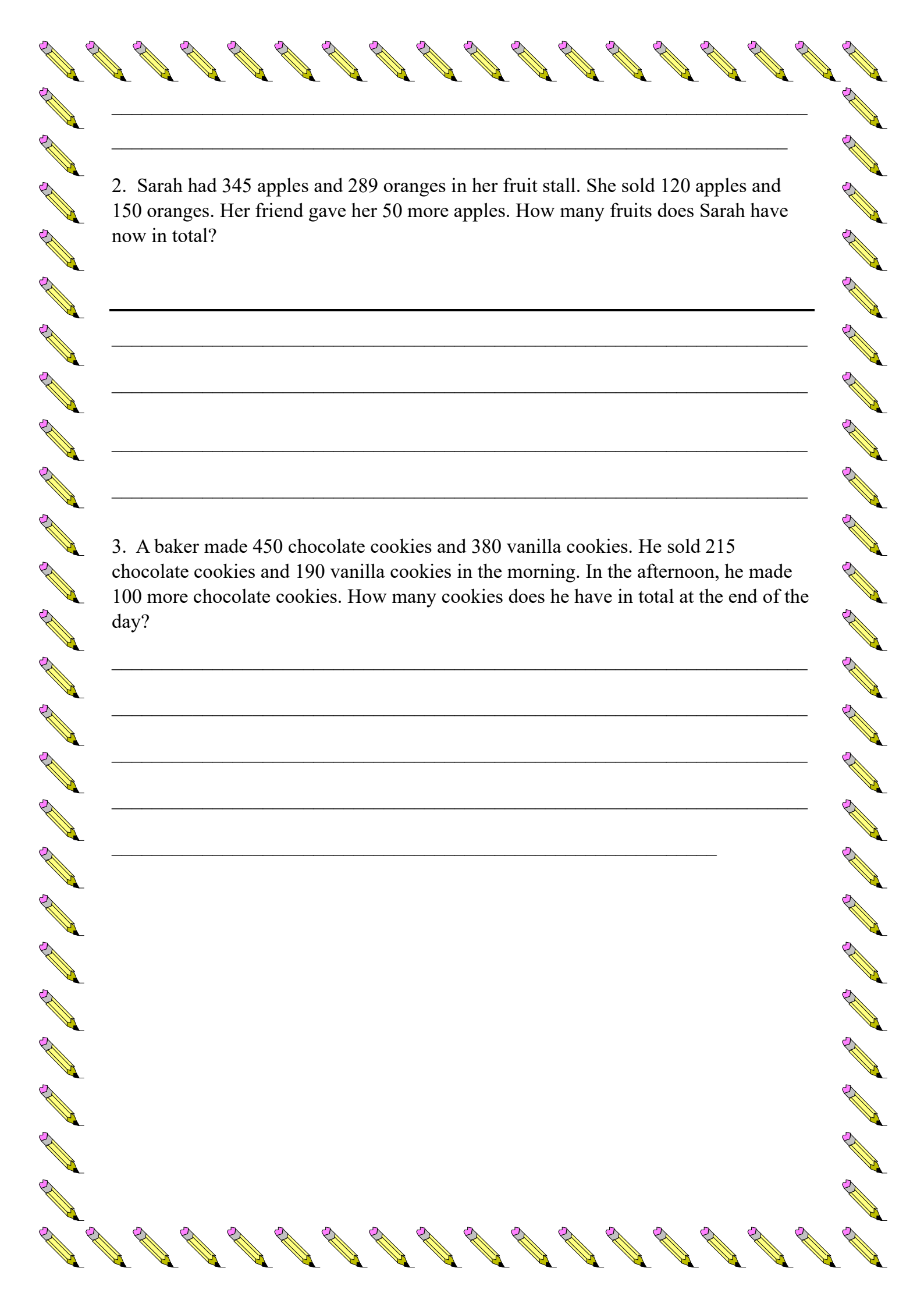
*Read each problem carefully and solve it. Show your steps.*

1. A school bought 1575 pencils and 1230 erasers. They distributed 850 pencils and 700 erasers to students. How many pencils and erasers are left with the school?

---

---

---



2. Sarah had 345 apples and 289 oranges in her fruit stall. She sold 120 apples and 150 oranges. Her friend gave her 50 more apples. How many fruits does Sarah have now in total?

3. A baker made 450 chocolate cookies and 380 vanilla cookies. He sold 215 chocolate cookies and 190 vanilla cookies in the morning. In the afternoon, he made 100 more chocolate cookies. How many cookies does he have in total at the end of the day?

# SUBJECT: ENVIRONMENTAL STUDIES

## Worksheet -1

### Topic: Plants, Flowers & Seeds

Name: \_\_\_\_\_

Roll number: \_\_\_\_\_

Q1. Fill in the blanks.

1. The \_\_\_\_\_ holds the plant firmly in the soil.
2. We get fruits and flowers from a \_\_\_\_\_.
3. A baby plant grows from a \_\_\_\_\_.
4. \_\_\_\_\_ carry water to all the parts of a plant.
5. \_\_\_\_\_ is the process in which a seed starts to grow and a tiny root comes out of it.

Q2. Multiple Choice Questions (MCQs)

1. Which part of the plant absorbs water from the soil ?  
a) Leaf                      b) Root                      c) Flower
2. Which part of the plant takes in and gives out air ?  
a) Stem                      b) Leaf                      c) Root
3. Which of these is a seed?  
a) Rose                      b) Pea                      c) Mango leaf
4. What do seeds need to germinate?  
a) Water and air              b) Toys                      c) Plastic
5. Which flower is commonly used to make perfume?  
a) Rose                      b) Sunflower              c) Lotus

Q3. Unscramble the Words

1. CESPI → \_\_\_\_\_
2. TEMS → \_\_\_\_\_
3. WERFLO → \_\_\_\_\_
4. TNAPL → \_\_\_\_\_
5. SILUNHTG → \_\_\_\_\_

Q4. Answer the following in full sentences.

- a. Write any two uses of flowers.

---

---

b. why are the leaves called 'kitchen of the plant' ?


---

---

c. Name any two types of seeds.

---

Q5. Draw and label the Parts of a Plant.



Q6. Draw your favourite flower and name it. Write two facts about it.



1. \_\_\_\_\_

2. \_\_\_\_\_





# SUBJECT: ENVIRONMENTAL STUDIES

## Worksheet -2

### Topic: Birds – Beaks, Nests, Feet & Claws, Food Habits

Name: \_\_\_\_\_ Roll number: \_\_\_\_\_

Q1. Match the pictures with their types of feet.

Options	Answers
A. 	Grasping feet
B. 	Webbed feet
C. 	Perching feet
D. 	Climbing feet

Q2. Choose the correct options to complete the sentences: *Mud, Stone*

- Look at the pictures of the nests of birds. Fill in the blanks with the materials the birds use to make their nests.



Flamingo



Penguin

Flamingo: \_\_\_\_\_

Penguin: \_\_\_\_\_


Q3. Match the type of beak with its function.

Options	Answers
A. small and pointed beak	Suck nectar
B. long and strong beak	Pick up grains
C. curved and strong beak	Catch fish
D. thin, straw-like beak	Break nuts

Q4. Unscramble the words.

1. RAROPT → \_\_\_\_\_
2. REYP → \_\_\_\_\_
3. LIMCBGIN TEEF → \_\_\_\_\_
4. GEALE → \_\_\_\_\_
5. KAEB → \_\_\_\_\_

Q5. Draw any one bird and label its beak, wings, feathers and claws.



Q7. Look at the picture and answer the questions in full sentences.



a. What type of beak does an eagle have?

---

b. How does it help the eagle?

---

c. Do all birds have the same type of beak as that of an eagle? Write 1 reason for your answer.

---

---

## SUBJECT: ART

### *Title: Wall Hanging from waste material*

Dear students,

Use your creativity to make a beautiful wall-hanging using waste materials easily available around you. This activity will help you learn the importance of Reduce, Reuse and Recycle while creating something decorative and useful.

#### **Materials you can use:**

- Plastic bottles
- Cardboard boxes
- Plastic spoons
- Dry shells
- Plastic glasses
- Any other safe materials available

*Be creative and turn waste into something beautiful!*

#### ***Samples:***

