

New Era Public School (Primary Wing)

Dear Students

The much-awaited summer break is here! It's time to relax and spend time with your family members and friends. We hope you are enjoying yourself and are involved in learning new things. This is the time to pursue your hobbies too. Do play some games or go for swimming, skating or dance classes.

We would like you to take out an hour or two every day to revise the concepts done in April and May in school. 2 worksheets of each subject have been prepared for you. Please do them independently. Take help from your parents or siblings only if required. 1 project has been assigned to each class. Collect information and pictures for the same. Use your creativity to make it attractive.

We look forward to welcoming you back in July.

Have a wonderful time!



New Era Public School  
English Worksheet 1  
Class V

Name \_\_\_\_\_

Date \_\_\_\_\_

Q1. Read the following paragraph and answer the questions.

### The History of the Internet

The internet has changed the world in many ways. It began many years ago as a small network for sharing information. In the late 1960's, scientists in the United States developed a system called ARPANET. It allowed computers to connect and communicate with one another. This was the beginning of the internet.

Over time, the internet grew bigger and faster. In the 1990s, the World Wide Web made it easier for people to find and share information. Soon, people began using the internet for emails, research, shopping, and entertainment. Today, the internet connects millions of people around the world.



The internet is very useful in daily life. Students use it to study and learn new things.

Teachers use it to prepare lessons. Doctors can help patients through online consultations.

People can pay bills, book tickets, and even work from home using the internet. It also helps people stay in touch with family and friends through video calls and messages.

The internet has helped people during difficult times too.

During emergencies, people can get important news quickly.

Farmers can check weather reports. Business owners can sell products online. Many people have learned new skills and found jobs through the internet.

The internet can be called a blessing because it saves time, spreads knowledge, and makes communication easy. However, it can also be a source of harm if used carelessly. Spending too much time online can affect health and studies. Some people may spread false information. Cyberbullying and online fraud are also problems people come across while using the internet.

Like any other tool, the internet can be good or harmful depending on how it is used.

Children can be harmed by the internet if they use it without guidance. They may spend too much time playing games or watching videos, which can affect their studies and health.

Some children may come across unsafe websites or talk to strangers online, which can be dangerous. Too much screen time can also cause poor eyesight, less physical activity, and disturbed sleep. This is why children should use the internet carefully and only under adult supervision.

The wise use of the internet can make life better for everyone.



Q1. What was the ARPANET?

---

---

Q2. How did the World Wide Web help people?

---

---

Q3. Mention any three uses of the internet today.

---

---

---

Q4. Why is it important for children to be careful while using the internet?

---

---

---

Q5. What rules or steps can children follow to use the internet safely and responsibly?

---

---

---



Q6. **True or False**

- a) The internet was first created only for shopping. \_\_\_\_\_
- b) Students use the internet for learning. \_\_\_\_\_
- c) The internet has no dangers. \_\_\_\_\_
- d) The internet can help people find jobs. \_\_\_\_\_

Q7. **Make sentences using these words.**

- a) communication \_\_\_\_\_
- b) knowledge - \_\_\_\_\_

Q8. Write 2 ways you use the internet.



New Era Public School  
English Worksheet 2  
Class V

Name: \_\_\_\_\_

Date: \_\_\_\_\_

Q1. Fill in each blank with a suitable word. Use the part of speech given in brackets.

During the summer holidays, Aman and his friends decided to explore an old fort near their village. They packed a \_\_\_\_\_ (noun), some food, and a flashlight. The morning was \_\_\_\_\_ (adjective), and the children walked \_\_\_\_\_ (adverb) along a rocky path.

As they entered the fort, Aman \_\_\_\_\_ (verb) a strange sound. “\_\_\_\_\_ (interjection)! Did you hear that?” he whispered. His friends looked at \_\_\_\_\_ (pronoun) nervously.

Inside, they found a room with a \_\_\_\_\_ (adjective) wooden door. Aman pushed it open \_\_\_\_\_ (adverb) and saw a staircase going underground. The children went down and discovered an old box hidden \_\_\_\_\_ (preposition) a stone table.

Aman opened the box and found a map \_\_\_\_\_ (conjunction) a small key. They \_\_\_\_\_ (verb) the map carefully and followed its directions.

After some time, they reached a tunnel. The tunnel was dark, \_\_\_\_\_ (conjunction) they did not give up. Suddenly, they saw a \_\_\_\_\_ (adjective) chest. It was locked, but the key opened it \_\_\_\_\_ (adverb).

Inside the chest were coins, jewels, and a \_\_\_\_\_ (noun). “We should share this secret with \_\_\_\_\_ (pronoun) teacher,” said Aman.

The friends \_\_\_\_\_ (verb) back home excitedly and promised to return for another adventure.



Q2. Choose the correct words from the bracket to complete the sentence.

- The explorers walked through the cave very \_\_\_\_\_. (careful / carefully)
- Riya found a \_\_\_\_\_ box hidden under the rocks. (mystery / mysterious)
- The children \_\_\_\_\_ the old map before starting the journey. (studied / study)
- The river was deep, \_\_\_\_\_ they crossed it with courage. (but / because)
- Aman ran \_\_\_\_\_ to call his friends. (quick / quickly)
- The puppy wagged \_\_\_\_\_ tail happily. (its / it's)
- We should use the internet \_\_\_\_\_ and safely. (wise / wisely)
- The fort was old \_\_\_\_\_ beautiful. (and / because)





New Era Public School  
Mathematics Worksheet-1

Name: \_\_\_\_\_

Class V

Date: \_\_\_\_\_

Q1. An odometer is a gauge on your vehicle's dashboard that measures the total distance travelled by your vehicle (in kilometres). A car's odometer is shown below (1,44,969 km). If it covers a distance of 1 more kilometre, what will be the reading on the odometer?



The number will be \_\_\_\_\_

Number name: \_\_\_\_\_

Q2. I have 3 bags with Rs 1,00,000 in each bag, 2 bags with Rs 10,000 in each bag and 5 bags with Rs 1000. Find the total amount.

Total amount = \_\_\_\_\_

The predecessor = \_\_\_\_\_



Q3. A learning app has 56,78,234 downloads. A gaming app has 67,89,123 downloads.

a) Which app is more popular? \_\_\_\_\_

b) How many more downloads does it have? \_\_\_\_\_

c) Round both numbers to the nearest lakh. \_\_\_\_\_ and \_\_\_\_\_

Q4. Town M has a population of 34,56,789. Town X has 10,00,000 less people.

a) Find the population of Town X. \_\_\_\_\_

b) Write in words (using International Place value system).  
\_\_\_\_\_  
\_\_\_\_\_

Q5. Create an 8-digit population number using these digits:

5, 7, 8, 1, 4, 6, 9

The greatest number = \_\_\_\_\_

The smallest number = \_\_\_\_\_

In words: \_\_\_\_\_

In words: \_\_\_\_\_

\_\_\_\_\_

\_\_\_\_\_

\_\_\_\_\_

\_\_\_\_\_

.

Q6. A national park has 23,45,678 butterflies, 12,34,567 birds and 8,90,123 rabbits.

a) Find the total number of animals and insects.

b) Which group has the smallest population?

c) How many more butterflies are there than rabbits?

Q7. During a city event, 48,960 water bottles were distributed equally among 48 schools. How many bottles did each school get?

Q8. A school distributed 2,345 booklets on environmental awareness every day for 28 days. How many booklets were distributed in total?

New Era Public School  
Mathematics Worksheet-2

Name: \_\_\_\_\_

Class V

Date: \_\_\_\_\_

Q1. Fill in the blanks:

- a) The smallest 7 digit number is \_\_\_\_\_
- b) The predecessor of the greatest 6- digit number is \_\_\_\_\_
- c) 10,000 more than 78,675 is \_\_\_\_\_
- d) 1,000 less than 34,567 is \_\_\_\_\_
- e) The place value of 6 in 3 4 **6**, 5 4 2,1 0 3 is \_\_\_\_\_
- f)  $80,00,000 + 7,00,000 + 60,000 + 4000 + 800 + 90 =$  \_\_\_\_\_
- g) 87,982 is rounded to (nearest 1000's) \_\_\_\_\_
- h) The place value and face value of Zero is always \_\_\_\_\_

Q2. Write in Roman numerals:

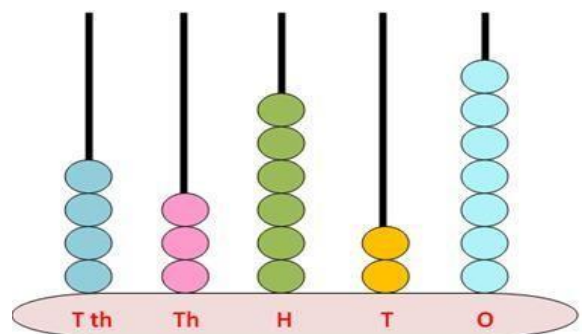
- a) 89 = \_\_\_\_\_
- b) 45 = \_\_\_\_\_
- c) 126 = \_\_\_\_\_
- d) 134 = \_\_\_\_\_

Q3. Solve and write the answer in Roman numerals:

- a)  $XC + XV =$  \_\_\_\_\_
- b)  $XLIV + VIII =$  \_\_\_\_\_
- c)  $XXIII - V =$  \_\_\_\_\_
- d) C divided by V = \_\_\_\_\_

Q4. Find the number which is 1, 89, 249 more than the number shown in the abacus:

Sol.



Q5. Solve and round off the sum to the nearest 10,000:

a)  $74,986$

$+ 28,374$

\_\_\_\_\_

\_\_\_\_\_

b)  $83,485$

$+ 68,459$

\_\_\_\_\_

\_\_\_\_\_

Rounded off to \_\_\_\_\_

Rounded off to \_\_\_\_\_

Q6. Divide: a)  $76548$  by  $34$

b)  $28125$  by  $45$

Q7. Multiply: a)  $792 \times 809$

b)  $8365 \times 862$

Q8. A school planted  $2345$  saplings every week for  $18$  weeks.

a) How many saplings were planted altogether?

b) Round the answer to the nearest thousand.

Name : \_\_\_\_\_

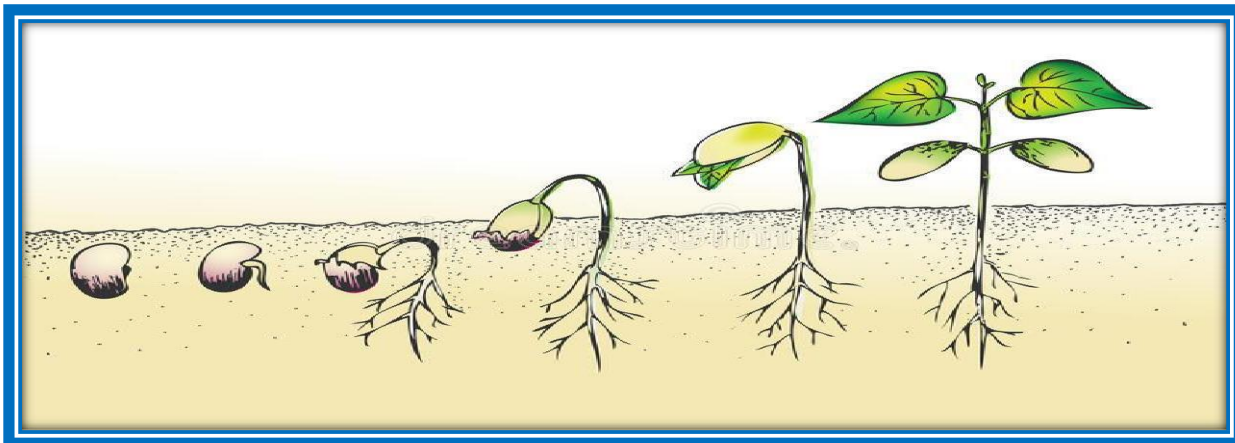
Date : \_\_\_\_\_

Q1. Read the text below. Write the missing words in the space. Choose the correct words from the box:

tube , female, seeds , grain , male, fruit, style, fertilization, stigma

When a pollen \_\_\_\_\_ lands on the \_\_\_\_\_ of a flower of the same species, a pollen \_\_\_\_\_ may grow down through the centre of the \_\_\_\_\_ towards the ovary. The \_\_\_\_\_ cell inside the pollen grain passes down the tube to join with the \_\_\_\_\_ cell in the ovule. This process is called \_\_\_\_\_. After this, the ovary develops into a \_\_\_\_\_.

Q2. Look at the diagram of stages of seed germination. Stepwise describe the process in the table given below.



Steps of the process of seed germination.

--	--	--	--	--

Q3. Analogies

a. Rose: flowering plant :: moss : \_\_\_\_\_

b. Burdock seeds: hooks:: maple seeds : \_\_\_\_\_

c. Stigma: pistil: : anther : \_\_\_\_\_

Q4. Give reason for the given statement:

a. Dormancy is important for seeds.

---

---

---

b. Roots grow first during germination.

---

---

---

c. Water dispersed seeds have lightweight husk.

---

---

---

Q4. Give one word:

a. When there are too many things in one place \_\_\_\_\_



b. The development of a new plant from a seed \_\_\_\_\_

c. The process of something being damaged or ruined \_\_\_\_\_

d. Ability of a seed to delay germination even when conditions are favourable.

---

Q5. Look at the plants given below and write the way it disperses its seed. Give reason for your answer.

a.		
b.		

New Era Public School  
 Science Worksheet 2  
 Class V

Name : \_\_\_\_\_

Date : \_\_\_\_\_

*Go beyond the book!*

Q1. WORD SEARCH- Find the words listed below. The words may appear forward, backward, up, down or diagonal. Words may overlap and cross each other. Circle them.

## ANIMAL HABITATS Word Search

COAST  
 FOREST  
 OCEAN  
 SAVANNA  
 WETLANDS  
 CORAL REEF  
 GRASSLAND  
 POND  
 SWAMP  
 DESERT  
 LAKE  
 RAINFOREST  
 TUNDRA  
 ARCTIC  
 FIELD  
 MOUNTAIN  
 RIVER  
 VALLEY

C	R	V	W	D	P	T	U	N	D	R	A	A	C
V	O	E	L	R	I	V	E	R	C	N	F	T	L
O	S	A	N	S	E	R	R	O	S	O	A	S	A
D	K	R	S	D	T	A	R	D	R	C	D	W	R
E	M	C	L	T	R	A	E	E	M	E	V	A	A
I	U	T	R	E	L	R	S	S	S	A	O	M	I
M	C	I	W	R	R	T	E	E	F	N	P	P	N
O	C	C	E	F	D	I	U	R	I	S	O	F	F
U	E	E	T	T	S	G	A	T	E	R	N	E	O
N	F	P	L	R	E	A	A	P	L	O	D	I	R
T	G	R	A	S	S	L	A	N	D	N	S	T	E
A	S	F	N	A	L	S	A	V	A	N	N	A	S
I	T	I	D	S	V	A	R	E	R	R	D	O	T
N	I	A	S	W	I	V	A	L	L	E	Y	E	M

## Houseplants Word Search

**DIRECTIONS:**  
 Find and circle the  
 vocabulary words  
 in the grid. Look  
 for them in all  
 directions including  
 backwards and  
 diagonally.

BONSAI  
 BUD  
 BULB  
 CACTUS  
 CHLOROPHYLL  
 DORMANT  
 FERN  
 FERTILIZER  
 GREEN  
 GROOM  
 HUMIDITY  
 HYBRID

H	T	H	X	K	P	A	P	M	L	I	L	Y	W	A	T	E	R	R
O	G	M	L	I	G	H	T	R	W	I	W	A	I	B	E	T	E	T
E	T	Z	A	Y	S	V	P	S	U	T	C	A	C	L	O	Z	O	N
G	T	B	T	B	N	J	H	W	O	N	I	N	C	A	I	T	A	A
G	U	I	I	A	Q	Q	O	S	S	O	E	J	E	L	I	N	N	M
N	D	Q	L	M	S	V	T	P	W	G	R	L	I	E	A	E	R	R
N	N	E	C	R	P	R	O	P	A	G	A	T	E	R	S	L	E	O
O	U	Y	M	F	E	F	S	X	K	C	R	P	W	U	N	U	F	D
I	O	T	L	O	X	P	Y	C	S	E	G	Z	H	T	O	C	K	B
T	B	I	R	I	Z	H	N	H	F	X	R	N	I	A	B	C	P	D
A	T	D	V	M	B	I	T	L	Z	Y	E	E	T	R	I	U	B	A
L	O	I	D	J	L	U	H	O	Z	R	E	G	E	E	E	S	M	X
I	O	M	M	G	U	T	E	R	Q	N	N	Y	F	P	X	B	U	B
T	R	U	C	O	B	H	S	O	D	I	Q	X	L	M	D	M	U	S
N	Z	H	N	M	W	Y	I	P	K	R	N	O	I	E	P	O	T	D
E	O	S	O	Z	B	B	S	H	T	M	K	E	E	T	H	P	G	J
V	B	O	K	E	S	R	X	Y	I	H	D	P	S	F	X	P	T	G
S	R	I	O	R	F	I	N	L	P	O	T	T	I	N	G	M	I	X
G	T	L	G	T	Q	D	U	L	T	G	J	D	I	D	P	Q	M	T

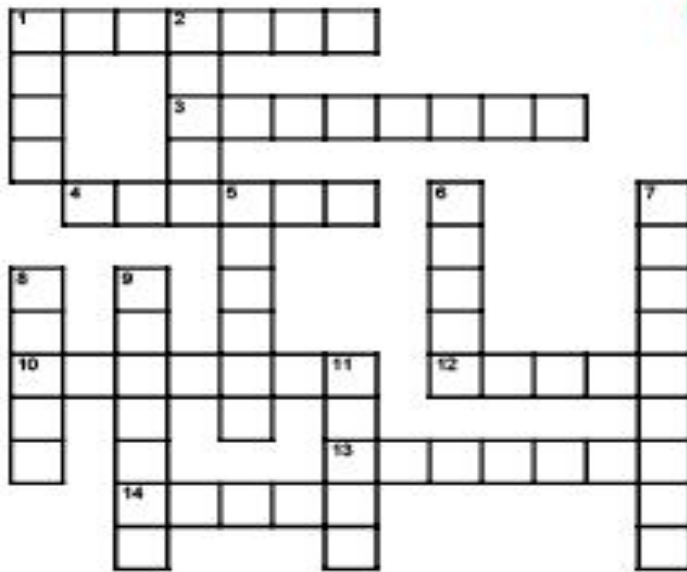


LIGHT  
 LILY  
 OXYGEN  
 PERLITE  
 PHOTOSYNTHESIS  
 POT  
 POTTING MIX  
 PROPAGATE  
 PRUNE

RHIZOME  
 ROOT BOUND  
 SCALE  
 SOIL  
 SUCCULENT  
 TEMPERATURE  
 VENTILATION  
 WATER  
 WHITEFLIES

Q2. Brain gym- Solve the crossword with the given clues.

## Our Solar System



### ACROSS

1. Closest planet to the sun.
3. Name for our galaxy.
4. Planet surrounded by a system of rings reaching into space thousands of kilometers.
10. Planet that is the furthest away from the sun but still in our solar system.
12. Path taken by a planet.
13. Famous Italian astronomer who played a

major role in the scientific revolution.

14. Third planet from the sun.

### DOWN

1. Planet with many massive volcanoes.
2. Small body of ice, dust and particles that orbits the sun.
5. Only planet in our solar system that rolls like a barrel instead of spinning

on its axis.

6. Since 2006 astronomers consider this celestial body a dwarf planet rather than a planet.
7. Last name of the first man to step on the moon.
8. The hottest planet in our solar system.
9. Largest planet in our solar system.
11. The number of planets in our solar system.

### Q3. Mind and Body (Do any one)

Go for morning or evening nature walks with your parents/ grandparents. Observe the plants, birds, insects and animals you come across. Draw/ Paste pictures and write interesting facts about any 5 of them on an A3 sheet.

Visit or search information about the National Science Centre in Delhi. Find information on Hands on exhibits and rare dinosaur models. Write them on an A3 sheet along with a few pictures.

New Era Public School  
Social Science Worksheet 1  
Class: V

Name: \_\_\_\_\_

Date: \_\_\_\_\_

Q1. Read the passage and answer the questions in 1 to 2 sentences:

Rita lives in a village with her parents, grandparents, brother, uncle, aunt, and cousins. Rita's parents will be moving to a city soon so that Rita and her brother get a better education. Her father hopes to get a better job in the city. Her grandparents and her uncle's family will not move with them.

a) Is Rita's family a joint family or a nuclear family? Give reason for your answer.

---

---

b) Why do Rita's parents want to move to the city?

---

---

c) What changes will take place in Rita's family when her parents move to the city?

---

---

d) Write 1 problem that Rita and her family may face in the city.



---

---

Q2. Nowadays, many people move from villages and small towns to large cities. What could be reason for this? Write any 3 reasons.



Q3. Identify the type of families and write 2 differences between small families and large families:

 _____	

Q4. Fill in the blanks:

- a) \_\_\_\_\_ families are mostly found in cities.
- b) \_\_\_\_\_ families need more space to live in.
- c) There are fewer members in \_\_\_\_\_ families.
- d) People migrate to cities for better \_\_\_\_\_.
- e) In a small family, the husband and wife take \_\_\_\_\_ together.
- f) There are many \_\_\_\_\_ families in villages.

Q5. What type of family do you live in – large or small? Who are the members of your family?

---



---



---

Q6. In what type of family are you likely to find these situations? Tick the correct column:

Roles and Responsibilities	Small family	Large family
a) Rishi is alone at home, playing games on the computer, because there is no one else to spend time with.		
b) Parents, aunts, and uncles take care of the elderly in the family.		
c) Grandmother and mother divide and share the household responsibilities.		

Q7. Answer the questions based on your own family:


- a) The father of my father is my \_\_\_\_\_.
- b) The mother of my mother is my \_\_\_\_\_.
- c) The brother of my father is my \_\_\_\_\_.
- d) The sister of my mother is my \_\_\_\_\_.
- e) The children of my uncle and aunt are my \_\_\_\_\_.

New Era Public School  
Social Science Worksheet- 2  
Class: V

Name: \_\_\_\_\_

Date: \_\_\_\_\_

Q1. Complete the crossword:



**Across**

**Down**

- 2. treating someone with respect
- 3. a person who does physical work
- 4. belonging to or connected with a particular place or area
- 6. to move from one place to another
- 8. to move someone or something from one place to another
- 1. without any smell
- 5. to work together and help each other
- 7. a movement that could be an earthquake

Q2. What are some of the problems that sweepers and garbage collectors face while working? Answer briefly.



_____
_____
_____
_____

Q3. Raj thinks that cleaning and sweeping are dirty jobs and, therefore, nobody should do these jobs. What will you tell Raj that he changes his view? Answer in about 2-3 sentences.

---

---

---

Q4. What do we learn from ant colonies about living in a community? Write any 3.



Q5. Identify the type of house and write one feature each:

---

---

---

---

---

---



Q6. What problems do the homeless people face?



न्यू एरा पब्लिक स्कूल  
ग्रीष्मकालीन गृहकार्य प्रपत्र (२०२६-२७)  
कक्षा - पाँचवी

नाम

प्रश्न१ निर्देशानुसार दिए गए भेद के अंतर्गत संज्ञा शब्द लिखें:

व्यक्तिवाचक संज्ञा

एक प्रसिद्ध भारतीय इमारत

एक स्वतंत्रता सैनानी

जातिवाचक संज्ञा

एक फल

एक पशु

भाववाचक संज्ञा

उपहार मिलने पर (भाव)

कम अंक आने पर (भाव)

प्रश्न२ दिए गए शब्दों के विलोम शब्द वर्ग-पहेली से ढूँढकर लिखें:

क) उपकार x

ख) दुश्मन x

ग) ज्ञान x

घ) विशेष x

अ	प	का	र	च
दो	म	अ	जा	न
स्त	ल	क	द	थ
ष	सा	धा	र	ण

प्रश्न३ दिए गए चित्रों के दो पर्यायवाची शब्द लिखें:

क)





ख)





ग)





घ)





न्यू एरा पब्लिक स्कूल


अपठित गद्यांश

कक्षा - पाँचवी

नाम - \_\_\_\_\_

नीचे लिखे गद्यांश को पढ़कर प्रश्नों के उत्तर लिखें

कैलाश सत्यार्थी भारत के प्रसिद्ध समाजसेवी हैं। उन्होंने बच्चों के अधिकारों और शिक्षा के लिए अपना पूरा जीवन समर्पित किया। उनका जीवन सेवा, साहस और मानवता की प्रेरणादायक कहानी है। उनका जन्म मध्य प्रदेश में हुआ था। बचपन से ही वे दूसरों की सहायता करना पसंद करते थे। जब उन्होंने छोटे बच्चों को मजदूरी करते देखा, तो उन्हें बहुत दुख हुआ। उन्होंने निश्चय किया कि वे बच्चों को बाल मजदूरी से मुक्त कराकर उन्हें शिक्षा दिलाएँगे।



कैलाश सत्यार्थी ने बच्चों के अधिकारों की रक्षा के लिए “बचपन बचाओ आंदोलन” शुरू किया। इस आंदोलन के माध्यम से उन्होंने हजारों बच्चों को बाल मजदूरी और अत्याचार से मुक्त कराया तथा उन्हें स्कूल भेजने का कार्य किया। उनकी मेहनत और समाज सेवा के कारण हजारों बच्चों का जीवन बदल गया। बच्चों के अधिकारों के लिए किए गए उनके महान कार्यों के लिए उन्हें सन् 2014 में नोबेल शांति पुरस्कार से सम्मानित किया गया। उनका जीवन हमें यह सीख देता है कि दूसरों की भलाई के लिए किया गया कार्य सबसे बड़ा और सच्चा कार्य होता है।

प्रश्न१) कैलाश सत्यार्थी कौन हैं? उन्होंने अपना जीवन किसके लिए समर्पित कर दिया?

उत्तर

प्रश्न२) उन्होंने कौन-सा आंदोलन शुरू किया और क्यों?

प्रश्न३) "बचपन बचाओ आंदोलन" का क्या प्रभाव पड़ा?

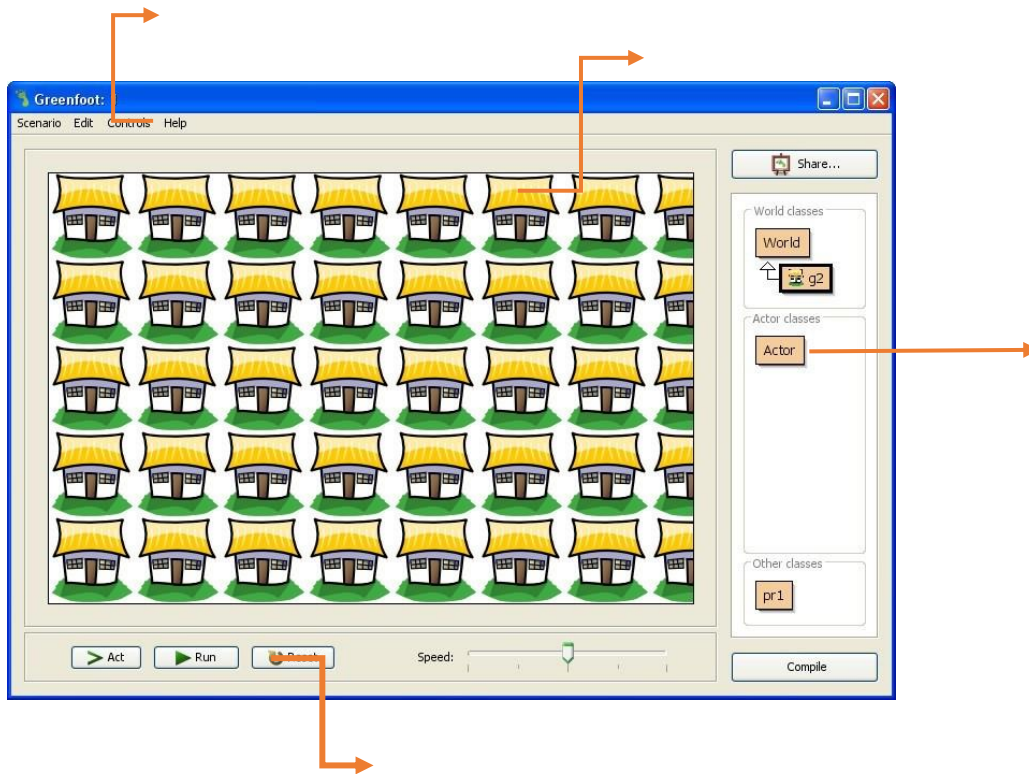
प्रश्न४) कैलाश सत्यार्थी को कौन-सा पुरस्कार मिला और क्यों?

प्रश्न५) हमें उनके जीवन से क्या सीख मिलती है?

New Era Public School  
Computer Worksheet  
Class V

**Note:** Take a printout of the worksheet and paste it in the computer notebook.

Q1. Label the following components of Greenfoot Interface.



Q2. Write an algorithm (simple steps) on how to play your favorite game that you enjoy on your mobile phone or computer.

---

---

---

---

---

---

---



Q3. Match the following standard Flowchart symbols with their names



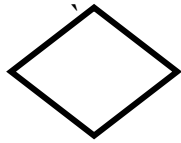
Flow Line



Process



Decision



Data



Terminator

Q4. Complete the given word search using colour pencils. (Internet Terminology)

T	N	Y	R	A	N	I	B	M	T	E	W	M	W
C	W	R	L	T	E	N	R	E	T	N	I	W	E
O	S	O	F	T	W	A	R	E	C	F	E	O	L
D	E	F	H	Y	P	E	R	L	I	N	K	O	O
E	D	U	O	L	C	O	M	P	U	T	E	R	S
O	D	A	T	A	O	R	D	W	I	R	E	S	S
I	T	N	E	T	W	O	R	K	E	M	T	F	E
R	E	B	X	M	K	E	Y	W	O	R	D	S	L
R	E	V	R	E	S	E	E	M	T	O	T	N	E
G	O	O	G	L	E	C	H	R	O	M	E	W	R
I	R	D	O	I	U	R	L	E	K	D	S	E	I
F	O	S	R	F	I	R	E	F	O	X	E	R	W
I	A	C	T	C	E	N	N	O	C	W	E	M	L
W	R	E	R	B	R	O	W	S	E	R	R	E	I

SOFTWARE  
 WIRELESS  
 BINARY  
 HYPERLINK  
 MODEM  
 KEYWORDS  
 GOOGLE CHROME  
 WIRES  
 COMPUTER  
 BROWSER  
 FIREFOX  
 INTERNET  
 NETWORK  
 CONNECT  
 WIFI  
 SERVER  
 CODE  
 CLOUD  
 URL  
 DATA

New Era Public School  
Class V Projects  
Sikkim / Lakshadweep and Andaman Nicobar Islands

**Class V A - Endangered Animals of Sikkim.**

Create a wildlife conservation poster on the following Endangered Animals of Sikkim.

You may include:

Red Panda  
Snow Leopard  
Himalayan Black bear  
Musk deer



Write information about each animal on A 4 sheets- specifying their food habits, special features and efforts being taken to protect them.


**Class VB – Tourists visiting Sikkim**

Sikkim is famous for tourism due to its scenic beauty, Buddhist culture and pristine bio-diversity.

On an A-4 sized sheet draw a bar graph representing number of tourists who visited Sikkim in the year 2025. (any four different places in Sikkim such as Gangtok, Ravangla, Nathula Pass, Pelling, Namche and Yumthang Valley)

On an another A-4 sized sheet paste the pictures of any four tourist places and write their names.

- a) Arrange the number of tourists in ascending order.
- b) Write the number of tourists at each place in words.



## Class VC - Traditional Paintings and Handicrafts of Sikkim

Identify 2 major painting styles and 2 famous handicrafts of Sikkim.

Explain the religious/cultural meaning behind Sikkimese art.

Name materials and techniques used in traditional artefacts.

Understand how art connects to Buddhism and local tribes: Lepcha, Bhutia, Nepali.

Present your project creatively either in a form of a booklet or on an A3 size sheet. Add colourful pictures with handwritten content.



## Class VD - अंडमान और निकोबार की वेशभूषा

अंडमान और निकोबार में पहने जाने वाले पारंपरिक कपड़ों के नाम और उनके चित्र इकट्ठा करें।

प्रस्तुति:- ए3 साइज के पेपर पर विवरण लिखें।

प्रत्येक कपड़े का चित्र चिपकाएं और उसके बारे में संक्षिप्त विवरण लिखें।

- रंगीन चित्रों और सजावटी अक्षरों का उपयोग करें।

- जानकारी को सुव्यवस्थित और स्पष्ट तरीके से प्रस्तुत करें।



## Class VE - Creating a Newspaper

Create a colourful newspaper front page on an A3 size sheet based on Lakshadweep or Andaman & Nicobar Islands.

Your newspaper should include:

- A creative newspaper name
- One main news headline
- Weather report
- Fun facts about the islands
- Environment corner
- One advertisement or slogan
- One puzzle/crossword related to island words.
- Decorate your newspaper with drawings of beaches, palm trees, waves and borders

