

Subject: HOLIDAY'S ASSIGNMENT, Class-IV, Session: 2026-2027

Summer vacation is the most enjoyable and eagerly awaited time for all students. It is a perfect opportunity to relax, rejuvenate and take a refreshing break from the regular school routine. This year, the holiday's assignment for Class IV is based on the meaningful theme of **Water Conservation**. Through this theme, students will learn the importance of saving water and using it wisely in their daily lives.

Activities have been carefully designed to be interesting, creative and informative. They will help students understand the value of water while enhancing their thinking, observation and presentation skills. Students are encouraged to explore simple ways to conserve water at home and in their surroundings, share ideas with family members and become responsible citizens.

Along with completing their assignments, students should enjoy their holidays by spending quality time with family and friends, staying hydrated and creating joyful memories. It is hoped that they return to school more aware, responsible and refreshed after a meaningful and happy summer break.

Summer break will commence from Monday, 18 May 2026 and will continue till Tuesday, 30 June 2026. The school will reopen on Wednesday, 01 July 2026, for Classes I to XII.



TIPS TO FOLLOW DURING VACATION

- **Stay active and healthy** – Play outdoor games like cycling, cricket, badminton or practice yoga to keep your body fit and strong.
- **Enjoy indoor activities** – Spend time playing board games like chess, ludo, carrom, or solving puzzles and word games.
- **Follow a routine** – Wake up early, eat on time, and maintain a simple daily schedule to stay disciplined.
- **Develop good habits** – Use polite words like *Please*, *Thank you*, *Sorry*, and *Excuse me* in your daily life.

- **Help at home** – Assist your parents and family members in small tasks like watering plants, arranging your room, or setting the table.
- **Read regularly** – Make reading a habit by enjoying storybooks, comics, or newspapers to improve your vocabulary.
- **Spend time with family** – Talk, play, and share moments with your family members and create happy memories together.
- **Care for nature** – Save water, avoid wasting resources, and follow the 3 R's – *Reduce, Reuse, Recycle*.
- **Stay hydrated and eat healthy** – Drink plenty of water and enjoy fresh fruits and homemade food. Avoid too much junk food.
- **Limit screen time** – Do not spend too much time on mobile phones or TV. Use your time for creative and fun activities.
- **Be kind and caring** – Respect elders, help others, and show love and care to everyone around you.
- **Enjoy and relax** – Take time to rest, have fun, and return to school refreshed, happy, and full of energy.
- **Enhance your Communication Skills**– Develop a habit of conversing in English with your family members and friends to improve proficiency in English language.

Fun with books

'Open a book and open your mind. Let the adventure begin!'

Suggestive English Books for Pleasure Reading:

1. Charlotte's Web- E B White
2. Stuart Little- E B White
3. School Stories- Paro Anand
4. Gulliver's Travels- Jonathan Swift
5. Ghosts Don't Eat- Anushka Ravishankar
6. Matilda and other Roald Dahl books- Roald Dahl
7. More Perfect than The Moon- Patricia Maclachlan
8. The Parrot Who Wouldn't Talk and Other Stories- Ruskin Bond
9. The Chronicles of Narnia- The Lion the Witch and The Wardrobe- C S Lewis Series:
10. Diary of A Wimpy Kid- Jeff Kinney
11. Famous Five- Secret Seven-Enid Blyton
12. Magic Tree House- Mary Pope Osborne
13. Diamond Brothers Detective Agency- Anthony Horowitz


Suggestive Hindi Books for Pleasure Reading:

1. पंचतंत्र की कहानियाँ -विष्णु शर्मा
2. ईदगाह- मुंशी प्रेमचंद
3. नंदन की बाल कहानियाँ
4. जंगल बुक- रुडयार्ड किपलिंग
5. रामायण बाल कथा- महर्षि वाल्मीकि
6. नीली छतरी- रस्किन बॉन्ड
7. दादी की कहानियाँ
8. चंपक की आधुनिक कहानियाँ
9. नंदन बाल कहानियाँ



The following links will help you to read books online:

- <http://www.magickeys.com/books>
- <https://panotbook.com/panchatantra-stories/>
- <https://kathakids.com/category/folktales/tenali-raman-stories>
- <https://www.booksie.org/>



- ❖ Kindly note all the projects given below will be submitted to the subject teachers on Tuesday, 07 July 2026.
- ❖ Names of students submitting best holidays assignments will be published in Learning Engagements.

Languages:

TASK 1: Based on Your Reading – Time to Reflect!

1. Which story or book did you enjoy the most?
2. Draw or illustrate your favourite scene from that story on A4 size sheet.
3. Create a new ending for the story with a twist. You may write it in **English or Hindi** on an A4 size ruled sheet.

TASK 2: Handwriting Matters!

A beautiful handwriting creates a good impression. Practice ONE page of English and ONE page of Hindi handwriting on alternate days for five days, in a single-lined notebook. Submit the notebook after the holidays along with the Holiday Assignment.

TASK 3: Poster Making – Ways to Save Water (घर में जल संरक्षण के 05 उपाय)

1. Design a thought-provoking colourful poster with a slogan on ways to save water on A4 Sheet. (You may write it in **English or Hindi**)
2. Also, on a separate A4 sheet, write 05 Conservation Tips followed in your family, such as
 - Turning off the tap while brushing
 - Using a bucket instead of a hose.
 - नल खुला न छोड़ें
 - ब्रश करते समय नल बंद रखें(You may write it in **English or Hindi**)

Note:

- Compile all the sheets together to form a booklet.
- Ensure that both languages are used—complete one task in Hindi and another in English (or vice versa).
- Label the booklet neatly with your name and class.

Integrated Project: Mathematics and EVS

Project: Survey on Water Consumption

Title: The Water Detective

Page 1: Cover Page

- Title: “Water consumption Survey”
- Student’s Name, Class, Section
- Make it creative

Page 2: Introductory Page

- Write 4-5 lines about ‘Importance of water in our lives’
- Add appropriate drawings to make it attractive.

Page 3: Water consumption in various activities at home.

- Make a neat table and fill it for a week.

Days	Activity	No of Family Members	Water Consumption (in litres)	Tips to save water	Water Saved (in litres)
Day 1	Bathing				
	Cooking				
	Mopping				

	Washing clothes				
Day 2	Bathing				
	Car cleaning				
	Cooking				
	Watering plants				
Day 3					
Day 4					
Day 5					
Day 6					
Day 7					
		TOTAL			

Let's Celebrate Special Days in Special Ways!

World Environment Day – Friday 05 June 2026

- Complete your water audit and take a pledge with your family. Click a picture and upload it in the Edu Next app under the folder- 'Summer Leisure Activities'.

Pledge: **"I promise to save water, turn off unnecessary lights, and conserve energy.**

I pledge to reduce, reuse, and recycle waste, keeping my surroundings clean and reducing pollution."



International Yoga Day & Father's Day – Sunday 21 June 2026

'A Dad is someone who holds you when you cry, scolds you when you break the rules, shines with pride when you succeed and has faith in you even when you fail'



- Celebrate this special day by spending joyful moments together. Practice simple yoga poses with your father while doing story yoga and create beautiful memories while strengthening the bond.
- Kindly share a few pictures or a short video in the EduNext app under the folder- 'Summer Leisure Activities'.

Suggestive link: https://youtu.be/zEdDScuF_qA

WORKSHEET ASSIGNMENT

Do the following worksheets in the school worksheet booklet for revising the concepts done:

English	Worksheet no: 04, 05, 26, 27
Hindi	Worksheet no: 14, 20, 25
EVS	Worksheet no: 01, 02
Mathematics	Worksheet no: 05, 06, 07

Wishing you and your family a joyful, safe and enriching summer vacation. We look forward to seeing our little learners back with happy memories and new experience.



Date: _____

Read the passage given below and answer the questions that follow:

Dr B.R. Ambedkar: A Visionary Leader



- I. Dr B.R. Ambedkar, affectionately known as Babasaheb, was born on 14 April 1891. His life left an indelible mark on the history of India. Despite facing discrimination, Babasaheb's determination and hard work led him to become the first person from the Dalit community to earn a doctorate degree from a foreign university.

- II. Babasaheb's father was an officer in the Indian army. Awarded a scholarship by the ruler of Baroda (now Vadodara), he studied at different universities in the United States, Britain, and Germany. His love for education was truly remarkable. Dr Ambedkar became the first Law and Justice Minister of independent India. He laid stress on the importance of building an equitable society with emphasis on equality of opportunity. He also became the Chairman of the Drafting Committee and played a crucial role in drafting the Constitution of India. He is known as the father of the Constitution of India. The Constitution of our country is an important document that guides the administration of our country. It comprises rules and regulations to be followed by the citizens of India for maintaining law and order. It provides the framework for political principles, procedures and powers of the government.

- I. As Babasaheb belonged to a marginalized community, he visualized a world where people would not discriminate against each other on the basis of caste, colour, creed or religion. He envisioned a society in which everyone would be treated equally. With liberty, equality, fraternity and justice as the guiding principles, his dream and vision played a pivotal role in shaping modern India.

On the basis of your reading of the passage, answer the following questions:

1. Why is Dr B.R. Ambedkar known as the father of the Indian Constitution?

2. Briefly describe Dr Ambedkar's vision pertaining to the creation of an equitable society.

3. List some qualities that helped Babasaheb to become the first person from his community to earn a doctorate degree from a foreign university.

4. From the passage, find the synonym of the word 'extraordinary'. (Para II)

5. Which of the following statements about Dr B.R. Ambedkar is 'false'?

- a) Dr Ambedkar was the Chairman of the Drafting Committee of the Indian Constitution.
- b) Dr Ambedkar advocated the importance of creating an equitable society.
- c) Dr Ambedkar was a renowned scientist and space explorer.
- d) Dr Ambedkar was popularly known as Babasaheb.

6. Choose the correct option to complete the statement given below:

Dr B.R. Ambedkar can be regarded as a role model for children because

- a) he belonged to a marginalized community and he faced social discrimination
- b) he excelled academically and faced challenges bravely
- c) he displayed unparalleled commitment towards sports
- d) he studied at famous universities in four different countries



7. Dr B.R. Ambedkar played a crucial role in drafting the Indian Constitution. Do you think it is essential to implement rules that promise equal rights to all the citizens of our country? Give two reasons to justify your answer.

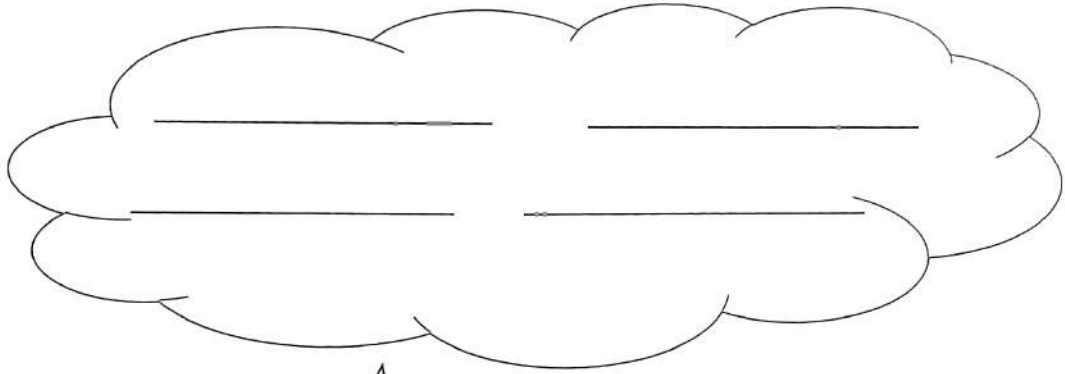
8. From the passage, find the antonyms of the following words:

(a) unimportant X _____ (Para II)

(b) ancient X _____ (Para III)

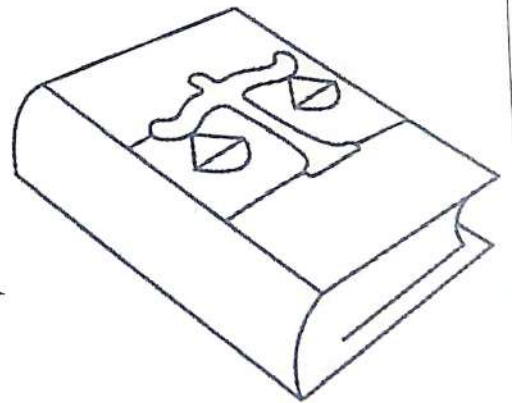
Word Builder

Form four new words by rearranging the letters of the word, 'CONSTITUTION'.



Did You Know?

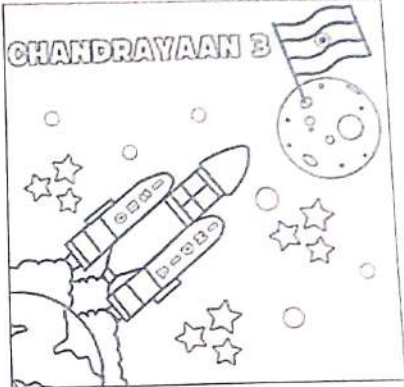

The Constitution of India is the longest written constitution in the world.



Worksheet 5- Reading Comprehension

Date: _____

Read the passage given below and answer the questions that follow:

- I. *Chandrayaan-3*, India's lunar exploration mission was launched from Satish Dhawan Space Centre, Sriharikota on 14 July 2023. The aim of the mission developed by the Indian Space Research Organization (ISRO) was to demonstrate safe soft landing on the moon's surface. The goal of the space expedition was to conduct scientific experiments and space researches.
- II. India scripted history as *Chandrayaan-3* became the first spacecraft in the world to land on the moon's south polar region on 23 August 2023. India is now the fourth country to have landed a spacecraft on the moon, after the United States of America, Russia, and China. This landmark event has opened doors for scientists to explore the possibility of human habitation on the moon in future. Our Prime Minister, Mr Narendra Modi declared 23 August as the National Space Day to commemorate the extraordinary achievement because India hoisted its flag on the moon on this day.An illustration of the Chandrayaan-3 mission. It shows a rocket launching from the Earth's surface, with the Indian flag flying from the moon's surface. The text 'CHANDRAYAAN 3' is written above the rocket. There are stars and a crescent moon in the background.
- III. *Chandrayaan-3* spacecraft consists of a *Vikram* lander and a *Pragyan* rover. The lander, '*Vikram*' has been named after one of the greatest scientists and astronomers of India, Dr Vikram Sarabhai who is regarded as the Father of the Indian Space Program. He was instrumental in the establishment of a large number of institutions including the Physical Research Laboratory (PRL) in Ahmedabad. The setting up of the Indian Space Research Organization (ISRO) in 1969 was one of his most remarkable achievements. The rover of *Chandrayaan-3* has been named *Pragyan* which is a Sanskrit word that means wisdom and intelligence. After the landing of the spacecraft, the rover ramped down from the lander and India took a walk on the moon! The rover's wheels had our national emblem and ISRO's logo embossed on them for leaving imprints on the lunar soil.
- IV. *Chandrayaan-3* is a collaborative effort of thousands of engineers, scientists, staff and support teams from different space institutions of our country. They accomplished their mission under the leadership of Mr S. Somanath, Chairman, ISRO. The success of the mission is a testament to their dedication and perseverance. The space researchers and scientists faced many challenges but they did not give up. They proved that nothing is impossible. This monumental achievement inspires us to chase our dreams with a strong determination.A simple line drawing of a rocket ship with a conical nose cone, a cylindrical body, and a tail section with fins. It is shown from a side-on perspective, angled upwards.

On the basis of your reading of the passage, answer the following questions:

1. State the main objective of the *Chandrayaan-3* lunar mission.

2. Why has 23 August been declared as the 'National Space Day of India'?

3. Why was the lander of *Chandrayaan-3* spacecraft named as 'Vikram'?

4. Do you think *Chandrayaan-3* lunar mission is a landmark in the history of our country? Give a reason to justify your answer.


5. How did the rover '*Pragyan*' leave imprints on the surface of the moon?

6. *Chandrayaan-3* lunar mission highlights the importance of team work and collaboration. What lesson do you learn from the success of the mission?



7. Choose a suitable title for the passage:

- a. ISRO's Chandrayaan-3 Comes Back to Life!
- b. NASA and ISRO Collaborate to Unravel a New Mystery!
- c. China Emerges as a Space Superpower!
- d. Chandrayaan-3, Lunar Exploration Mission Creates History!



8. From the passage, find the synonyms of the words given below:

- i. outstanding (Para III) - _____
- ii. difficulties (Para IV) - _____

9. Which of the following statements about Chandrayaan-3 is correct?

- a. Chandrayaan-3 became the fourth spacecraft in the world to land on the moon's south polar region.
- b. India's historic mission to Mars, Chandrayaan-3 was launched on 23 August 2023.
- c. The spacecraft of Chandrayaan-3 consists of a Vikram lander and a Pragyan rover.
- d. Chandrayaan-3 was launched under the leadership of Dr Vikram Sarabhai.

10. From the passage, find the antonyms of the words given below:

- (i) ordinary X _____ (Para II)
- (ii) possible X _____ (Para IV)

Complete the following statement.



If I get a chance to explore outer space, I will _____

Worksheet 26- Integrated Grammar

Date: _____

Rearrange the words given below to frame meaningful sentences. Use appropriate punctuation marks and capital letters wherever necessary.



1. lovely wow a painting what is this

2. is blue my where dress

3. quietly please class sit the in

4. beautiful lotus is flower a

5. make noise the hospital please don't outside

6. captain ravi the school cricket is team the of


7. danced ritu gracefully party the at

8. misplaced oh keys i the car of my

9. spilled some accidentally on coffee I table the

10. the cubs vixen her burrow into the protect to took them

Worksheet 27- Integrated Grammar



Date: _____

Identify the errors in the following sentences and rewrite them correctly.

Use appropriate punctuation marks and capital letters wherever necessary.

a. how exciting the match was?

b. there is many interesting story in this book?

c. a team of singers sang melodious at the concert!

d. nina and aman will going to mumbai next week.

e. veena is a more intelligent girl in our class.

f. tenali raman was known for his wise.

g. my friends give me a group of flowers on my birthday.

h. sameer gave a wooden old chair to his uncle.



दिनांक _____

अभ्यास पत्रिका-20

कक्षाकार्य / गृहकार्य

कहानी लेखन

1. दिए गए संकेत बिंदुओं की सहायता से कहानी पूर्ण कीजिए।

ईमानदार, बटुआ, सदस्य, उपहार, पैसें, प्रसन्न, ईमानदारी, सम्मान, मेला

हरीश अपने गाँव का सबसे _____ लड़का माना जाता था। वह हमेशा सच बोलता और किसी का नुकसान नहीं होने देता था। एक दिन गाँव में मेले का आयोजन हुआ। हरीश भी _____ देखने गया। लोगों की भीड़ इतनी थी कि उसे कुछ समझ ही नहीं आ रहा था। तभी उसकी नज़र ज़मीन पर पड़ी। वहाँ एक छोटा चमड़े का _____ पड़ा था। उसने उसे उठाया और देखा कि वह _____ से भरा हुआ था। हरीश तुरंत समझ गया कि यह मेले में आए किसी आदमी का होगा। वह उसी समय मेला समिति के _____ के पास गया और बोला, "यह किसी का खोया हुआ बटुआ है, कृपया इसे मालिक तक पहुँचा दीजिए।" समिति के _____ ने माइक पर घोषणा करवाई। कुछ ही देर में एक वृद्ध व्यक्ति वहाँ पहुँचे और बोले कि उनका बटुआ खो गया था। जब उन्होंने बटुआ खोला तो देखा कि उनका सारा पैसा सुरक्षित था। वे हरीश की ईमानदारी देखकर बहुत _____ हुए। उन्होंने हरीश को आशीर्वाद दिया और अपनी तरफ से एक छोटा-सा _____ भी दिया। हरीश ने विनम्रता से उपहार लिया और घर लौट आया। घर आकर उसने महसूस किया कि सच्चाई हमेशा अंत में _____ दिलाती है। इसलिए हमें हर परिस्थिति में सत्य बोलने और _____ के मार्ग पर चलने का साहस रखना चाहिए।

अध्यापक/ अध्यापिका हस्ताक्षर _____

अपठित गद्यांश

प्रश्न 1. नीचे दिए अपठित गद्यांश पर आधारित प्रश्नों के उत्तर अपने शब्दों में लिखिए।

जीवन में असफलता या समस्या से घबराना कायरता है। जीवन बहुत लंबा है। यह ज़रूरी नहीं है कि हर मोड़ पर सफलता ही मिले। बहुत बार असफलता का भी सामना करना पड़ता है, इसलिए इससे घबराने की ज़रूरत नहीं है। केवल एक अच्छा विचार आपको सफलता के निकट ला सकता है। अब्राहम लिंकन ने कहा था कि 'मैं हमेशा पढ़ाई करता हूँ और तैयार रहता हूँ। सफलता कभी न कभी मेरे पास अवश्य आएगी।' कई बार विद्यार्थी किसी परीक्षा की तैयारी करते हैं किन्तु सफलता उन्हें नहीं मिलती। एक बात सदैव ध्यान में रखनी चाहिए कि ज्ञान और सीखने का न कोई अंत है और न कोई समय। हमें अपनी रुचि को ध्यान में रखते हुए अपने जीवन का लक्ष्य निश्चित करना होगा।

क) कायरता किसे कहते हैं?

ख) हमें सफलता के निकट कौन ला सकता है?

ग) क्या ऐसी चीज़ है जिसका का कोई अंत नहीं है?

घ) गद्यांश में से कोई दो संज्ञा शब्द ढूँढ़कर लिखिए।

ड) निम्नलिखित शब्दों के अर्थ लिखकर वाक्य बनाइए।

i) समस्या

ii) कायरता

iii) सदैव

च) अब्राहम लिंकन ने अपने बारे में क्या कहा था?

छ) निम्नलिखित शब्दों के विलोम शब्द गद्यांश में से ढूँढकर लिखिए।

i) सफलता - _____

ii) वीरता- _____

iii) मरण- _____

iv) दूर- _____

v) अज्ञान- _____

vi) आरंभ- _____

अध्यापक/ अध्यापिका हस्ताक्षर _____

Date: ____ / ____ / ____

Topic: Chapter 1 Living Together

Worksheet No. 1

Key Notes:

- Public places like parks, schools and roads are shared by everyone.
- Festivals like Van Mahotsav teach us to care for nature.
- Helping hands make the neighbourhood cleaner and safer.
- Sharing food and work builds friendship and unity.
- A good community is built on care, respect and cooperation.

COMMUNITY AND LIVING TOGETHER

A community is a group of people who live together in the same place, such as a village, town, or city. People in a community share many things like homes, roads, parks, schools, markets and places of worship. They depend on one another for their daily needs. For example: shopkeepers sell food, teachers teach students, doctors help sick people and cleaners keep the area neat etc. When people help and respect each other, the community becomes a happy and safe place to live. Living in a community teaches us important values like sharing, cooperation, responsibility, honesty and care for others. When a problem comes, people come together to solve it. When there is happiness, they celebrate together. Thus, a community is not just about living near each other but about living together with love and understanding.

FESTIVALS OF DIFFERENT COMMUNITIES IN INDIA (EATING TOGETHER)

India is home to people from many communities and each community celebrates its festivals with joy. A beautiful part of many Indian festivals is eating together, which brings people closer and removes differences.

During **Onam** in Kerala, families and neighbours share a big meal called Onam Sadhya, sitting together on the floor.

On **Baisakhi** in Punjab, people eat together in the Langar at Gurudwaras, where everyone is treated equally.

On **Magh Bihu (Uruka)** in Assam, people cook food together and eat as a community. During

Eid, families prepare special dishes and share food with relatives and people in need. On

Christmas, people come together to share meals, cakes and happiness.

These festivals teach us the values of sharing, equality, empathy and unity.

COMMUNITIES OF INSECTS AND THEIR WORK

Just like humans, insects also live in communities and work together.

In an ant community, each ant has a duty. Some ants collect food, some build the anthill, some look after the baby ants and some protect the group.

In a bee community, bees live in hives. Some bees gather nectar, some make honey and others guard the hive.

These insect communities teach us that everyone's work is important and teamwork helps everyone survive and grow.

IMPORTANCE OF PROTECTING NATURE


Nature gives us everything we need to live—air, water, food, trees, animals and land. Trees help us by giving oxygen and keeping the air clean. Rivers and rains provide water. Animals and plants keep nature balanced.

If we harm nature by cutting trees, polluting water or wasting resources, it harms our future. Festivals like Van Mahotsav, where people plant trees together, remind us that nature must be protected by everyone.

Children can protect nature by planting trees, saving water, using dustbins, reusing things and caring for birds and animals.

Q1) Multiple Choice Questions (MCQs)

- a) Chandan lives in a _____.
- i) City ii) Village iii) Town iv) Colony
- b) Under the big banyan tree, the elders usually _____.
- i) Play games ii) Sleep iii) Gather and talk iv) Study
- c) Van Mahotsav is also known as the _____.
- i) Flower Festival ii) Tree Planting Festival
iii) Water Conservation Festival iv) Fruit Festival
- d) Which group of people come together to help during crop harvesting in Sikkim?
- i) Doctors ii) Khetala iii) Teachers iv) Fishermen
- e) Picture-based Question:



What kind of place is shown in the picture?

- i) Hospital ii) Market iii) Park iv) School

Q2) Match the following.

Column A	Column B	Answer
a) Shopkeeper	i) Keeps the neighbourhood safe	a- _____
b) Police	ii) Helps students learn	b- _____
c) Teacher	iii) Sells goods and daily items	c- _____
d) Health Centre	iv) Provides treatment	d- _____
e) Playground	v) A place to run and play	e- _____

Q3) Give reason:

a) Van Mahotsav is celebrated in the rainy season, not in winter.

b) Leaves buried in a pit can become manure.

c) A community feast was held after planting trees to celebrate teamwork and encourage participation.

Q4) Unscramble the letters given below to form meaningful word.

a) OMMUNCTIY : _____

b) SGWIN : _____



Q5) Your class wants to make a “Happy Community Corner.” What things would you include (rules, pictures, helpers, kind actions) to show how people live together?

Q6) Why should we share public places like parks and bus stops?

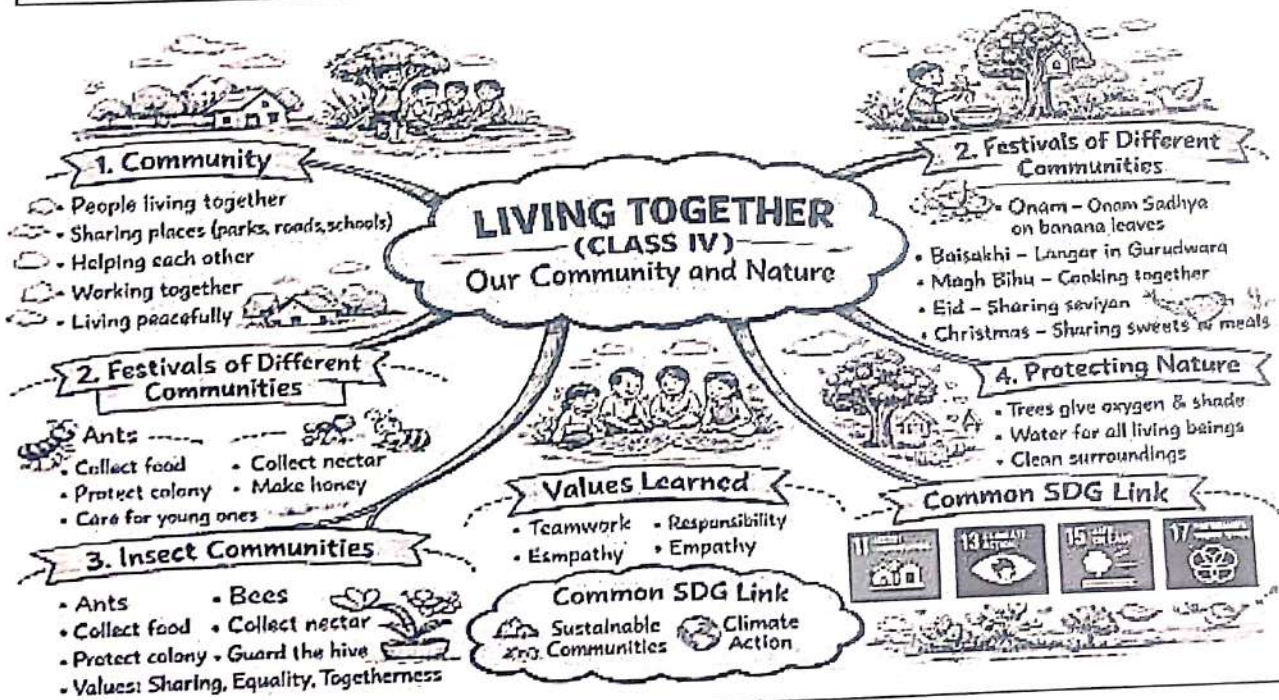
Q7) A new family has moved into your neighbourhood. Explain how you and your community can make them feel welcomed and comfortable?

Q8) Your park in the society is not clean and many people have stopped visiting. Suggest two steps to make the park clean and enjoyable again.

Q9) Look around your classroom right now. List "three people" (staff/teachers/helpers) who help your class run smoothly and write how each one helps?

- 1) _____ helps by _____
- 2) _____ helps by _____
- 3) _____ helps by _____

Q10) Draw a small map of your neighbourhood or school area showing at least three public places. Label each place properly.



Mentor's Feedback: _____

Date ___/___/___

Topic:

SDG 11 – Sustainable Cities and Communities

Teaches us to build clean, safe, and caring communities.

SDG 13 – Climate Action

Encourages us to protect nature and the environment.

SDG 15 – Life on Land

Helps us understand the importance of plants, trees, animals, and insects.

SDG 17 – Partnerships for the Goals Teaches us the power of working together.

Worksheet No. 2

Q1. Colour and observe the given pictures and answer the questions:



a) **What activity are the children doing?**

b) **Name one value shown in this picture.**

i) Teamwork

ii) Carelessness

iii) Laziness

Q2. Write T for True and F for False. If false, correct the statement.

a. A community is a group of people who live together and help each other.

b. Public places like parks and schools belong to only a few people.

c. Eating together during festivals helps people feel united.

d. Ants and bees live alone and do not work in groups.

e. Protecting nature is important for the health of our community.

Q3. Read each situation and write your response accordingly.

- a) Riya saw her friend throw a chips packet on the road near the park. There was a dustbin nearby, but her friend walked away. What should Riya do and which value does this action show?

Your response:

- b) After heavy rain, the road near Aman's school was damaged. Children found it difficult to cross, so neighbours came together to help. Why is it good when people work together in such situations?

Your response:

- c) During hot summer days, Meena saw birds standing near her window. She noticed there was no water for them in the area. What should Meena do and which value is shown by her action?

Your response:


Q4. Create & Reflect Create

1. **Create a new festival for your community.**

Name of the festival: _____

One activity people will do together: _____

One value it teaches: _____



Reflect

2. **Complete the sentence:**

"I feel happy when I help others because

Value Imbided

When people live together, help one another, and share responsibilities, the community becomes happy and strong.

Mentor's Feedback: _____

Date / /

Topic Addition & Subtraction

Worksheet No. 5

Section A

Q1. Choose the correct option.

i. What will be the sum of place value of digit 8 and 6 in the number 38,657?

- a. 86,000 b. 80,600 c. 8,600 d. 8,006

ii. The numbers that are added are called _____

- a. sum b. difference c. addends d. product

iii. 700 thousand + 30 thousand is equal to –

- a. 73,000 b. 7,30,000 c. 7,03,000 d. 70,300

iv. By adding or subtracting _____ to and from the number, the number remains same

- a. zero b. One c. Same number d. predecessor

v. Sum of the greatest 4-digit number and the smallest 4-digit number is _____

- a. 9,999 b. 10,000 c. 10,999 d. 8,900

Q2. State whether True or False.

a. Observe the calculations given in the figure carefully.

Which of the given problem(s) has/have been solved correctly?

- i. Problem 1 ii. Problem 2
iii. Both Problem 1 & 2 iv. None

Problem 1	
1 5 8 6	
+ 4 3 1	
<hr/>	
2 0 1 7	

Problem 2	
6 5 8 1	
+ 2 4 3	
<hr/>	
9 0 1 1	




b. When the greatest 4 digit even number is added to 2000, it gives 10,000.

If False, write the correct answer _____


Section B

Q3. Baby unicorns have lost their way in Fairyland! Help them reach their mother unicorn by finding which mother's number matches the total of the two baby unicorns.

(Hint: Add the baby unicorns' numbers to find their mother!)

	Baby Unicorn 	Mother Unicorn 	Baby Unicorn 
a.	3,845	3,218	1,069
b.	1,283	2,260	977
c.	1,586	3,653	1,632
d.	2,864	4,914	789

Q4. A football championship was organised in the city and continued for six exciting days, from Tuesday to Sunday. The number of fans who came to cheer for their favourite teams on different days were:



Day	Number of Spectators
Tuesday	33,501
Wednesday	14,092
Thursday	14,795
Friday	63,014
Saturday	35,798
Sunday	74,546

Add the number of spectators for the given days and **round off** each total to the **nearest thousand**.

- Wednesday and Sunday = _____ Spectators.
Round Off : _____ Spectators.
- Thursday and Friday = _____ Spectators.
Round Off : _____ Spectators.
- Saturday and Sunday = _____ Spectators.
Round Off : _____ Spectators.

Section-C

Q5. A relief organisation collected 12,485 blankets from one city and 23,764 blankets from another city. Later, another branch donated 15,230 blankets to the relief organisation.

How many blankets were collected in total?

Q6. During a charity event, students from three classes collected the following amount:

Class IV A – ₹ 6,458

Class IV B – ₹ 7,945

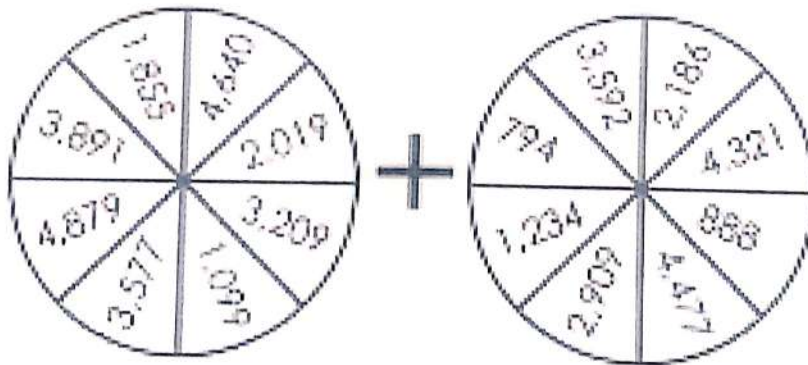
Class IV C – ₹ 5,680

How much money did they collect altogether? Which class collected the least amount and which class collected the maximum amount of money?

Section-D

Q7. Choose one number from each circle and add them together in the space provided.

Repeat this activity six times, selecting a different pair of numbers each time.



a.	b.	e.
c.	d.	f.

Mentor's Feedback

Date __/__/__

Topic Addition and Subtraction

Worksheet No. 6
Section A

Q1. Choose the correct option.

- i. What is the difference between the place values of digit 9 and 4 in the number 49,382?
- a. 50,000 b. 5,000 c. 40,000 d. 45,000
- ii. five thousand – three thousand fifty is equal to –
- a. 2,000 b. 1950 c. 195 d. 2050
- iii. If you subtract zero from a number, the answer remains _____.
- a. The next number (Successor) b. The same number
c. The previous number (Predecessor) d. Double the number
- iv. The difference between the greatest 4-digit number and the smallest 4-digit number is ____.
- a. 8,900 b. 9,999 c. 9,000 d. 8,999
- v. The sum of two numbers is 8,456. If one of the numbers is 5,423. Find the other number.
- a. 9,124 b. 8,924 c. 0 d. 8,923
- vi. If Rahul solved 6,540 math problems in January and 3,875 in February, how many more did he solve in January than February?
- a. 2,765 b. 3,675 c. 2,665 d. 1,765
- vii. Rohan's father has ₹9,000. He gives ₹2,000 to Rohan and ₹3,500 to Riya. How much money is still left with him?
- a. ₹3,400 b. ₹3,600 c. ₹3,500 d. ₹4,000

Section- B

Q2. State whether the statement is True or False

- i. The difference between 10,000 and 8,999 is 1,101. (True/False)
If false, correct the statement: _____
- ii. In subtraction, if we interchange the minuend and subtrahend, the difference remains the same. (True/False)
If false, correct the statement: _____
- iii. Verify the following subtraction is correct?
 $6,542 - 3,215 = 3,417$
If false correct it _____

Q3.A delivery company transported several packages during the festive season. After completing most of the deliveries, there were 24,375 packages still left in the warehouse. If 38,692 packages had already been delivered, how many packages did the company have in total at the beginning?

Section- C

Q4. At the end of the Eco Week celebration, the students of Salwan Public School participated in a Tree Plantation Drive. They planted saplings and also donated gardening tools to a nearby NGO. Following is the count of items contributed by Grade I–V and Grade VI–XII:

Items	Grade I-V	Grade VI-XII
Saplings	5,872	7,469
Gardening Tools	1,245	1,056

The NGO planned to plant all the saplings. However, after checking, they found that 2,175 saplings were too weak to survive and could not be planted. How many healthy saplings do they have now for planting?

Out of the total gardening tools collected, 198 were either broken or rusted and could not be used. How many gardening tools were in working condition and can be used?

Section- D (Brain O Brain)

Q5. Based on Assertion and Reasoning, choose the correct option:

i. Assertion (A): The sum of two even numbers is always even.

Reason (R): Even numbers end with 0, 2, 4, 6, or 8.

- a. A and R are true, and R explains A
- b. A and R are true, but R does not explain A
- c. A is true, R is false
- d. A is false, R is true

ii. Assertion (A): Subtracting 1 from any number gives its predecessor.

Reason (R): Predecessor means the number that comes after.

- a. A and R are true, and R explains A
- b. A and R are true, but R does not explain A
- c. A is true, R is false
- d. A is false, R is true

Q6. Virat Kohli scored 9,230 runs in Test cricket and 14,557 in One day cricket.

a. How many more runs did he score in One day cricket than in test cricket?

b. How many runs did he score in total in the two formats?

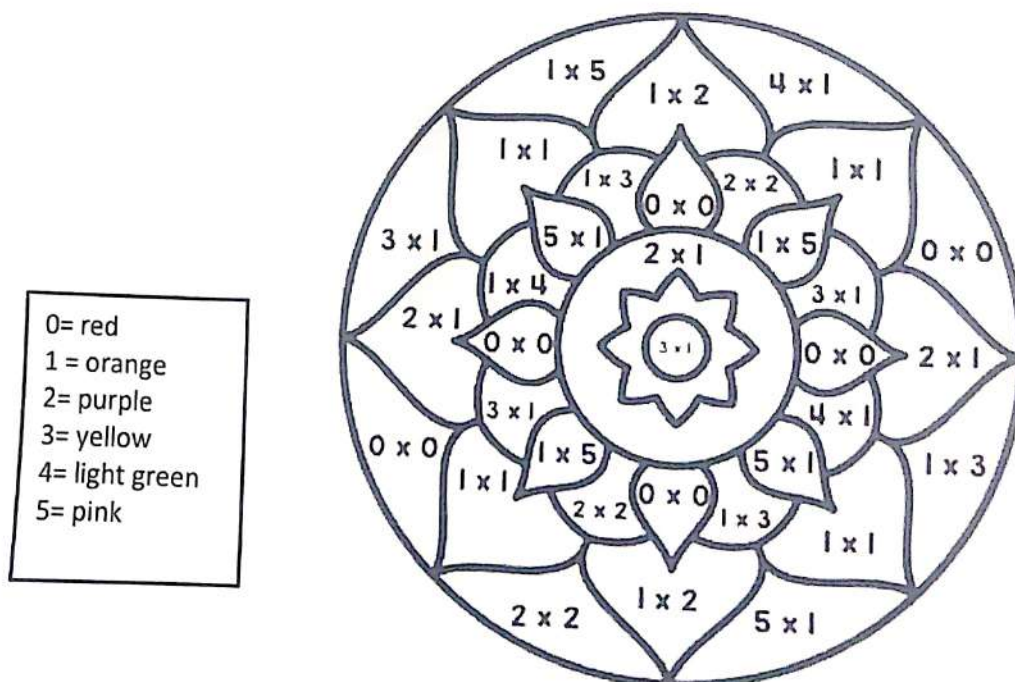
Mentor's Feedback _____

Topic Multiplication

Key Points

- Multiplication is a mathematical operation that combines equal groups.
- The symbol for multiplication is "x" .
- Two numbers can be multiplied in any order. Their product remains the same.
- Factors: The numbers being multiplied are called factors.
- Product: The result of the multiplication is called the product.
- Multiplier: The number that tells how many times to multiply the multiplicand.
- Multiplicand: The number being multiplied.
- Three numbers can be grouped in any order and then multiplied. Their product remains the same. Example: $2 \times 3 \times 4 = (2 \times 3) \times 4 = 6 \times 4 = 24$
 $2 \times 3 \times 4 = 2 \times (3 \times 4) = 2 \times 12 = 24$
- The product of a number and 0 is always 0. Example: $4 \times 0 = 0$; $12 \times 0 = 0$
- The product of a number and 1 is the number itself. Example: $5 \times 1 = 5$, $12 \times 1 = 12$, $225 \times 1 = 225$
- The product of an odd number and an even number is always even.
- The product of two odd numbers is always odd.
- The product of two even numbers is always even.

FUN ACTIVITY



Q1. Choose the correct option.

i. If a bag contains 6 apples, how many apples are in 7 such bags?

- a. 44 b. 36 c. 42 d. 38

ii. $7 \times 4 =$ _____

- a. Half of 56 b. 28 c. 24 d. both a & b

iii. $45 \div 5 =$ _____

- a. 10 b. 9 c. $45 - 36$ d. both b & c

iv. $6 \times 8 =$ _____

- a. 48 b. $50 - 2$ c. 56 d. a & b

v. $32 \div 8 =$ _____

- a. 2×2 b. 4 c. $32 \div 4$ d. a & b

vi. 10 times 10 can be written as:

- a. 5×2 b. 100 c. 10×10 d. c & b

Section-B

Q2. Riya said $56 \div 7 = 6$ because $7 \times 6 = 56$.

Is she correct? Yes / No

Explain why: _____

Q3. A pack of stickers has 8 stickers. How many stickers are there in 9 such packs?

Write the equation and answer:

Equation: _____ Answer: _____

Q4. A teacher divided 48 crayons equally among 6 students. How many crayons does each student get?

Write the equation and answer:

Equation: _____ Answer: _____

Q5. Solve using repeated addition:

$7 \times 5 =$ _____

Q6. Solve using repeated Subtraction:

$40 \div 8 =$

Section-C

Q7. Draw groups to show this division: $20 \div 4$ (Hint: Draw any objects/shapes to show.)

Q8. Create a story sum for 6×4 and solve it:

Story: _____

Answer: _____

Q9. Write any multiplication fact by using 11 and 8 and its related division fact also:

Example: _____ \times _____ = _____
_____ \div _____ = _____

Section-D

Q10. A box contains 9 chocolates. How many chocolates are there in 7 such boxes?

Q11. 45 students are divided equally into 5 teams for a race. How many students in each team?

Mentor's Feedback
