






**ST. THOMAS SCHOOL, SAHIBABAD**  
**ANNUAL EXAMINATION WORKSHEET (2025-2026)**  
**CLASS - III**  
**GENERAL KNOWLEDGE**

1.	Tick (✓) the correct answer.				
(a)	Who won the Wimbledon Men’s Singles title in 2021?				1
	A) Roger Federer	B) Novak Djokovic	C) Pete Sampras	D) Rafael Nadal	
(b)	A mass of ice formed by snow in the mountains is _____.				1
	A) Glacier	B) Rapids	C) Geyser	D) Canyon	
(c)	This state has the remains of Nalanda, an ancient university of international repute.				1
	A) Himachal Pradesh	B) Uttar Pradesh	C) Bihar	D) Kashmir	
(d)	Which shortcut key is used to change the selected text into italic?				1
	A) Ctrl + B	B) Ctrl + h	C) Ctrl + S	D) Ctrl + i	
(e)	What do the five rings of the Olympic flag and Olympic symbol stand for?				1
	A) 5 Continents	B) 5 States	C) 5 lakes	D) 5 Seas	
2.	Fill in the blanks:				
(a)	_____ is the currency of Thailand.				1
(b)	_____ is a sport that was originated in Japan.				1
(c)	_____ is the folk dance of Tripura.				1
(d)	_____are the heavenly bodies in the sky that produce their own light.				1
(e)	_____ is a mass of ice formed by snow in the mountains.				1
3.	Match the following:				5
	Column-A		Column-B		
	(a) The Ranji Trophy		(i) France		
	(b) Ghoomar		(ii) Ajanta		
	(c) Euro		(iii) Coal		
	(d) Fossil Fuel		(iv) Rajasthan		
	(e) Cave paintings		(v) Cricket		
4.	Answer the following:				
(a)	What is the motto of the Olympic Games?				1

(b)	Who is the current Prime Minister of India?	1
(c)	Which Indian wrestler won a silver medal at the 2020 Tokyo Olympics?	1
(d)	Which country recently launched the world's fastest passenger train?	1
(e)	Which is bright yellow precious metal used in making jewellery?	1
5.	Identify the following:	5
(a)	<div> <hr/></div>	<div><div>(b)</div><div> <hr/></div></div> <div><div>(c)</div><div> <hr/></div></div>
(d)	<div> <hr/></div>	<div><div>(e)</div><div> <hr/></div></div>