





**ST. THOMAS SCHOOL, SAHIBABAD**  
**ANNUAL EXAMINATION WORK SHEET (2025-2026)**  
**GENERAL KNOWLEDGE**  
**CLASS - VII**

|    |   |     |
|----|---|-----|
|    | <b>Choose the correct answer</b>  |     |
| 1. | The country which is not a member of OPEC is  | [1] |
|    | (A) IRAN <input type="checkbox"/> (B) UAE <input type="checkbox"/> (C) UK <input type="checkbox"/> (D) LIBIYA <input type="checkbox"/>              |     |
| 2. | The country which is not a member of G7 is  | [1] |
|    | (A) Russia <input type="checkbox"/> (B) Italy <input type="checkbox"/> (C) UK <input type="checkbox"/> (D) Canada <input type="checkbox"/>          |     |
| 3. | The only candid that is known to hibernate during winter is   | [1] |
|    | (A) red fox <input type="checkbox"/> (B) raccoon dog <input type="checkbox"/> (C) dhole <input type="checkbox"/> (D) hoary <input type="checkbox"/> |     |
| 4. | The animal Akela from 'The Jungle Book' is a  | [1] |
|    | (A) fox <input type="checkbox"/> (B) Jackal <input type="checkbox"/> (C) Wild dog <input type="checkbox"/> (D) Wolf <input type="checkbox"/>        |     |
| 5. | The series of missile system which are capable of carrying nuclear war heads are  | [1] |
|    | (A) Prahaar <input type="checkbox"/> (B) Agni <input type="checkbox"/> (C) Nag <input type="checkbox"/> (D) Prithvi <input type="checkbox"/>        |     |
|    | <b>State True or False</b>  |     |
| 1. | One third of Africa consists of desert. <span style="float: right;">[_____]</span>  |     |
| 2. | Australia is the wettest inhabited continent. <span style="float: right;">[_____]</span>  |     |
| 3. | The airport at Venice is named after Marco Polo. <span style="float: right;">[_____]</span>   |     |
| 4. | The flying fox is actually a type of bat. <span style="float: right;">[_____]</span>  |     |
| 5. | Tab is one of the modifier keys. <span style="float: right;">[_____]</span>   |     |
|    | <b>Answer in a word:</b>  |     |
| 1. | Name the Greek Mathematician who is famous for his theorem on right triangles _____   |     |
| 2. | Name the vaccine given to children at the time of birth which protects them from TB. _____  |     |
| 3. | Name any one disease that affects colon. _____  |     |
| 4. | Name the organ affected by Meningitis. _____  |     |
| 5. | Name the dog which was bred to herd cattle. _____   |     |
| 6. | Name the largest penguin. _____   |     |

|   |  |     |
|---|--|-----|
| Identify and write the name of the following pictures |  | [5] |
|   |  <p>(A) _____</p>   |     |
|   |  <p>(B) _____</p>  |     |
|   |  <p>(C) _____</p>  |     |
|   |  <p>(D) _____</p> |     |
| Answer the following questions                        |  | [5] |
| 1.  | What is Caravel?<br><br><br>   |     |
| 2.  | What is 'Spirit of St.Louis' ?<br><br><br>   |     |
| 3.  | What does Polymath refer to?<br><br><br>   |     |

|    |   |  |
|----|---|--|
| 4. | What is 'ASEAN'?  |  |
| 5. | Which double-humped camels made their debut in the 2026 Republic Day Parade in India? |  |